

ANAND PUBLIC SCHOOL

HAPPY HOLIDAYS

DATESHEET FOR P.T-4 EXAMS (2025-26)

| Date | Day | Nur. | L.KG | U.KG | I-III | IV-VIII |
|--------------|-----------|----------------|----------------|----------------|---------|---------|
| 16 Jan, 2026 | Friday | Eng.+Oral | Eng.+Oral | Eng.+Oral | English | English |
| 20 Jan, 2026 | Tuesday | Hindi+Oral | Hindi+Oral | Hindi+Oral | Hindi | Hindi |
| 24 Jan, 2026 | Saturday | Draw. & Rhymes | Draw. & Rhymes | Draw. & Rhymes | | Science |
| 28 Jan, 2026 | Wednesday | G.K & Conv. | G.K & Conv. | G.K & EVS | EVS | S.St. |
| 30 Jan, 2026 | Friday | Maths+Oral | Maths+Oral | Maths+Oral | Maths | Maths |

DATESHEET FOR FINAL MINOR EXAMS (2025-26)

| | |
|--------------|---|
| 31 Jan, 2026 | English Creative + ASL (Speaking Skill + Listening Skill) + Phy. Edu. |
| 02 Feb, 2026 | English Dict.+Reading+Recitation+Calligraphy+Phy. Edu. |
| 03 Feb, 2026 | English Conv.+Reading+Music+Moral Value+Phy. Edu. |
| 04 Feb, 2026 | Hindi Dict.+Reading+Recitation+Calligraphy+Sanskrit/Punjabi Reading |
| 05 Feb, 2026 | Hindi Reading+Creative+Moral Value+Sanskrit/Punjabi Reading |



To encourage confidence, creativity, communication skills and joyful learning, students will prepare the following activities during the holidays and present them after reopening:

Short Skit / Drama (up to 2 minutes)

Theme: Moral Values, Good Habits, Social Awareness or Festivals.



Stage Show Event- “ATTENTION SEEKER”

Selected performances will be showcased on stage.



Ramp Walk (Compulsory Participation)

All students will participate in a Ramp Walk to build confidence, stage presence, and self-expression.



Prizes will be awarded to winners.

Note: Participation is mandatory for all students.

Winter holidays homework

Class II

English: Do given worksheet in separate notebook

Cursive writing: Do page number 25 to 48

Term 2 dictation word: learn 1 to 80 words from syllabus card


English conversation:topic 1(Talking about your family) Roll number 1 to 14

Topic 2 (Permission from father for picnic) Roll no 15 to 28

Topic 3 (Conversation with doctor)roll number 29 to 42

* learn all creative in English done in notebook

* look at the picture and write few lines on it



Activity : Write five sentences about " My winter vacation "

Hindi: Do given worksheet

जागृति सुलेख माला: Do page number 21 to 40

term 2 dictation words: learn 1 to 80 words from syllabus card

* learn all creative done in Hindi notebook

* look at the picture and write few lines on it



गतिविधि: क्रिया शब्दों का एक चार्ट बनाएं (A4 sheet)

EVS : learn Is- 12, 13 full

Activity : Make a beautiful chart of Earth on A4 sheet

Maths: Do given worksheet

Activity: Make a beautiful model of clock

Drawing : Do this activity on colourful sheet



GK : learn full syllabus done in notebook

Computer : learn lesson 5,6,7 full

PD - Draw an activity on Basant Panchami and Lohri
on A4 sheet

Syllabus of PT.4

English lit: lesson 10, 11

English lang: lesson 8 , 14

Hindi lit: lesson 9,11

Hindi lang: lesson 11, 12+ क्रिया , काल

EVS :lesson 12, 13

Maths: Chapter 9 ,11 ,13 + tables 2 to 14

English Worksheet

08/12/2025

- Fill in blanks with the verb (was , were)
1. The children ____ talking loudly.
 2. Rustam ____ selling samosas.
 3. I ____ on the train yesterday.

Complete these sentences using (has, have, had)

1. Who ____ the door key?
2. Ram ____ a doubt. He asked the teacher.
3. I ____ some important work now.

Complete it with simple past tense.

1. Shivam ____ inside the well. (well)
2. The bear slowly ____ into the forest. (walk)
3. The thirsty crow ____ stones in the pot of water. (drop)

Fill up with past tense

1. Allen ____ across the river without any difficulty. (swim)
2. Have the police found who ____ the necklace? Anil asked. (steal)

Complete these sentences with correct word.

1. Press the ____ pedal slowly to stop the car (break / brake)
2. Do you ____ where kitty has gone? (no / know)
3. He has made a beautiful painting of a (dear / deer)

Find three smaller words from these words.

1. Golden = _____ , _____ , _____
2. Football = _____ , _____ , _____

Give one word for each of these phrases.

1. A shelter for a dog = K _____
2. A person whose job is to extinguish fire = F _____

Write similar word

1. Cry = _____
2. Intelligent = _____

Write past form.

1. Do - _____
2. Take - _____
3. Eat - _____
4. Know - _____

Hindi worksheet

1. खाली स्थान भरे

1. जो शब्द किसी काम का करना या होना बताते हैं वह _____ कहलाते हैं।

2. जिन शब्दों से किसी काम के होने के समय का पता चलता है उसे _____ कहते हैं।

3. काल के _____ भेद होते हैं।

2. काल के भेद का नाम बताओ

1. रवि पत्र लिखेगा। _____

2. बच्चा खेल रहा है। _____

3. कल शायद वर्षा होगी। _____

3. क्रिया शब्दों को रेखांकित करें

1. पक्षी उड़ रहा है।

2. किसान हल चला रहा है।

4. निम्नलिखित शब्दों के दो दो समानार्थक शब्द लिखें

1. बादल _____.

2. पेड़ _____.

5. सही समानार्थक शब्द के सामने [✓] का निशान लगाओ

1. पानी - वारी _____. वारि _____

2. पहाड़. - गिरी _____. गिरि _____

6. गिनती को हिंदी में लिखो।

26 _____

35 _____

33 _____

39 _____

24 _____

40 _____

7. पर्यायवाची शब्द लिखो

1. पुत्री _____

2. जग _____

3. भूमि _____

8. मुहावरों के अर्थ लिखो

1. आसमान सिर पर उठाना -

2. घी के दिए जलाना -

3. पेट में चूहे कूदना -

9. विलोम शब्द लिखो

1. खेलों में _____ जीत तो होती रहती है ।

2. कोई भी काम छोटा _____ नहीं होता ।

3. चीजों के दाम घटते _____ रहते हैं।

10. अनेक शब्दों के लिए एक शब्द लिखो

1. गौरव काम से जी चुराता है। गौरव _____ है । (कामचोर / आलसी)

2. विनय चित्र बनाता है । विनय _____ है । (मूर्तिकार/ चित्रकार)

Maths Worksheet

Q1 → Write in words

i) ₹ 7.50

ii) ₹ 369.15

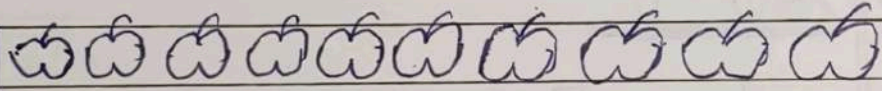
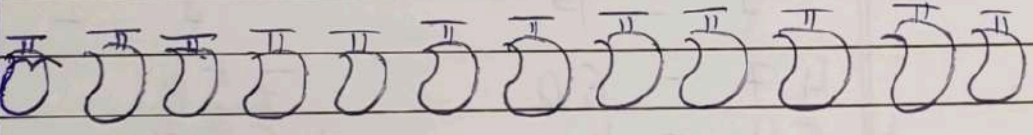


iii) ₹ 54.20

Q2 → Write in numerals

i) Six hundred forty two rupees and sixty paise - _____

ii) Ninety four rupees and ten paise - _____

Q3 → Look at the table and answer the following questions

| | |
|--------|--|
| Apple |  |
| Mango |  |
| Orange |  |
| Grapes |  |

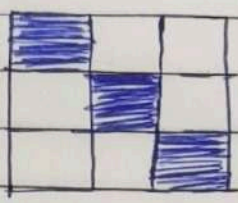
Q1 → Which fruit is liked by the most students?

Q2 → How many more students like mango than grapes?

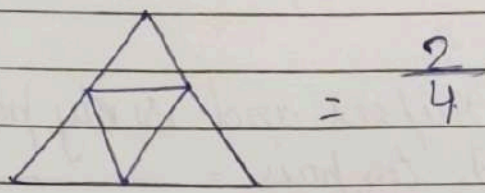
Q3 → Which fruit is liked by the least students?

Q4 → What is the total number of students?

Q4 → What fraction of the whole is shaded?



Q5 → Colour the figure.



$$= \frac{2}{4}$$

Q6 → Write the tables of 2 to 15

Q7 → Solve it.

$$\begin{array}{r} 2 - P \\ 47 - 60 \\ + 54 - 40 \\ \hline \end{array}$$

$$\begin{array}{r} 2 - P \\ 758 - 60 \\ + 567 - 50 \\ \hline \end{array}$$

$$\begin{array}{r} 2 - P \\ 72 - 10 \\ - 37 - 60 \\ \hline \end{array}$$

$$\begin{array}{r} 2 - P \\ 932 - 60 \\ - 458 - 70 \\ \hline \end{array}$$