

# ANAND PUBLIC SCHOOL

# HAPPY HOLIDAYS

## DATESHEET FOR P.T-4 EXAMS (2025-26)

Date	Day	Nur.	L.KG	U.KG	I-III	IV-VIII
16 Jan, 2026	Friday	Eng.+Oral	Eng.+Oral	Eng.+Oral	English	English
20 Jan, 2026	Tuesday	Hindi+Oral	Hindi+Oral	Hindi+Oral	Hindi	Hindi
24 Jan, 2026	Saturday	Draw. & Rhymes	Draw. & Rhymes	Draw. & Rhymes	.....	Science
28 Jan, 2026	Wednesday	G.K & Conv.	G.K & Conv.	G.K & EVS	EVS	S.St.
30 Jan, 2026	Friday	Maths+Oral	Maths+Oral	Maths+Oral	Maths	Maths

## DATESHEET FOR FINAL MINOR EXAMS (2025-26)

31 Jan, 2026	English Creative + ASL (Speaking Skill + Listening Skill) + Phy. Edu.
02 Feb, 2026	English Dict.+Reading+Recitation+Calligraphy+Phy. Edu.
03 Feb, 2026	English Conv.+Reading+Music+Moral Value+Phy. Edu.
04 Feb, 2026	Hindi Dict.+Reading+Recitation+Calligraphy+Sanskrit/Punjabi Reading
05 Feb, 2026	Hindi Reading+Creative+Moral Value+Sanskrit/Punjabi Reading



**To encourage confidence, creativity, communication skills and joyful learning, students will prepare the following activities during the holidays and present them after reopening:**

**Short Skit / Drama** (up to 2 minutes)

**Theme:** Moral Values, Good Habits, Social Awareness or Festivals.



**Stage Show Event- “ATTENTION SEEKER”**

Selected performances will be showcased on stage.



**Ramp Walk (Compulsory Participation)**

All students will participate in a Ramp Walk to build confidence, stage presence, and self-expression.



**Prizes will be awarded to winners.**

**Note: Participation is mandatory for all students.**

# HOLIDAYS HOMEWORK

## CLASS - 4

### ENGLISH:-

#### Activity -

1. Make a table of Synonyms (1-20) on A4 colourful sheet.(roll no. 1-20)
2. Make a table of Antonyms (1-20) on A4 colourful sheet.(roll no. 1-20)
3. Make a table of rules of Simple present, simple past and present continuous- tense on A4 sheet.
4. Learn Term 2 Dictation words 1-80
5. Revise P.t. 4 syllabus

#### English Lit.:- Ch 12, 13

#### English Lang.:- Ch 12, 13, 14 full

#### 1. Fill in the blanks using the collective nouns-

**Choir, pride, bouquet, quiver**

- (i) The chief guest was presented with \_\_\_\_\_ of flowers.
- (ii) Aslam, the lion was the head of the \_\_\_\_\_.
- (iii) I am a singer in the \_\_\_\_\_.
- (iv) The hunter carried \_\_\_\_\_ of arrows.

#### 2. Rewrite the following sentences correctly-

- (i) This bag are full of old coins.
- (ii) One of the eggs were rotten.
- (iii) I were studying.
- (iv) Arjun were happy.

#### 3. Join the following sentences using conjunctions-

- (i) The party was over. I left (as soon as)
- (ii) You could play in the park. You could go swimming. (or)

(iii) Rama is kind to animals. Rama's sister is not. (but)

(iv) I did my homework. My brother watch the TV. (while)

**4. Given below the names of few colours. Circle the correct option-**

(i) pearl (green, purple, white)

(ii) olive (red, green, orange)

(iii) khaki (brown, Orange, purple)

(iv) azure (yellow, blue, red)

**5. Change the sentences into simple present and present continuous-**

(i) Samar plays the violin.

(ii) The old man sells ice cream.

(iii) The fisherman is throwing the net.

(iv) Mr Frank walks along the beach.

**6. Write the types of sentences-**

(i) How are you feeling now \_\_\_\_\_

(ii) We have a class picnic this Saturday \_\_\_\_\_

(iii) Please pass me a glass of water \_\_\_\_\_

(iv) Have you join the German class \_\_\_\_\_

**7. Change these affirmative sentences into negative sentences-**

(i) Deepali is an editor.

(ii) My sister is studying.

(iii) Roshni and her friends are helping.

**8. Change these statements into questions -**

1. You can take the baby to the park.

2. Chintan is chasing butterfly.

3. Anna is writing a short play.

4. The performers are ready for the show.

**9. Fill the missing letters to complete preposition word -**

- (i) \_\_\_e\_\_\_i\_\_\_e                      (ii) \_\_\_tu\_\_\_o\_\_\_  
(iii) \_\_\_e\_\_\_l\_\_\_d                      (iv) b\_\_\_tw\_\_\_n

**10. Fill in the blanks with suitable preposition-**

- (i) There is a lot of snow here\_\_\_ winter  
(ii) The parcel arrived \_\_\_ Tuesday.  
(iii) Aruna goes to the gym \_\_\_ 7 o'clock.  
(iv) We will talk about it \_\_\_dinner.

**11. Write 7-8 lines about any two pictures or scenes for Picture composition practice.**

**12. Revise Creatives.**

**HINDI:-**

\* चक्रीय परीक्षा 4 पाठ्यक्रम दोहराएं

साहित्य- पाठ 12,13

व्याकरण - पाठ 11,12

मुहावरे 11 से 20

भारतीय मासों के नाम

\* कठिन शब्द -2 दोहराएं।

\* प्रति दिन पठन पाठन का अभ्यास करें।

\* सृजन लेख लिखें...

1. स्वच्छता का महत्व
2. हम पानी को कैसे बचाएं।
3. अच्छे विद्यार्थी के गुण

\* चित्र लेखन करें \_ पृष्ठ संख्या (114-115)

## MATHS:-

\* Revise P.T.- 4 Syllabus

Ch - 10, 11

### Activity

1. Make a hanging clock with colourful sheet using matchsticks and same other material.
2. Paste the pictures of five famous mathematicians and write 5 lines about it.

(Do Maths worksheet in separate note book)

### WORKSHEET

1. Find the area of rectangle of the following length and breadths.

- a)  $L=7\text{cm}$   $B=6\text{cm}$                       b)  $L=9\text{cm}$   $B=5\text{cm}$

2. Find the area of squares with the following sides.

- a) 8cm    b) 12cm

3. A rectangular box is 13cm long and 8cm wide. What is it's area?

4. Find the area and perimeter of a square field with one of its sides as 13cm.

5. Draw the following with a ruler and a pencil

- a) An obtuse angle  $\angle LMN$                       b) An acute angle  $\angle ABC$

6. Draw a triangle of each type

- a) Equilateral triangle                      b) Isosceles triangle                      c) Scalene triangle

7. Draw line segments of the given lengths

- a) 3.4cm    b) 5.5cm

8. Fill in the blanks

- a) An \_\_\_ triangle is one in which all sides of a triangle are equal.  
b) A \_\_\_ triangle, is one in which one angle is of  $90^\circ$  .  
c) In \_\_\_ triangle all three sides are of different lengths.

9. A blackboard is 12m in length and 8m in breadth. Find it's perimeter and area.

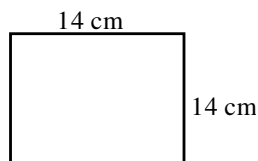
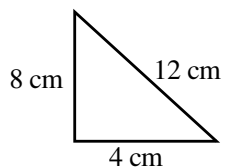
10. The sides of a triangle are 11cm, 12cm and 13cm. Find its perimeter.

11. The area of a rectangular field is 72m. Its length is 9m. Find it's breadth.

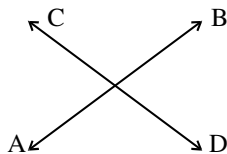
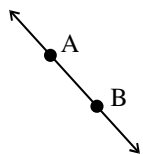
12. Find the area of square of side 7m.

13. Find the area of rectangle. If it's length is 7m and breadth is 5m.

14. Find the perimeter of the given figures.



15. Name the following lines.



## SCIENCE:-

\* Revise P.T.4

Ch. 10, 11 Full

**Draw diagram in note book of Science:-**

\* Molecules in solution (solid + liquid gas) (Pg-92)

\* Paste different type of fabric and name them

\* A magnet attracting iron nails (Pg-105)

\* Sea breeze & land breeze (Pg-117)

\* Water cycle (Pg-120)

\* Solar system (Pg-126)

\* Revolution causes season (Pg-130)

\* 4R-rule (Pg-141)

\* Ways to reduce pollution (Pg-142)

## **SOCIAL STUDIES:-**

\* Prepare syllabus of PT-4.

Ch-12, 13 full

\* Paste the picture of festivals & National days & write their importance according to religion

\* Paste picture of different forms of dances in India.

\* Write five ways to reduce waste.

\* Make a paper bag & cloth bag & write its importance.

## **MORAL VALUES:-**

\*Revise Ch - 6 to 10.

## **GENERAL KNOWLEDGE:-**

Learn Ch-29, 30, 32, 33, 34, 35, 36, 39, 44, 47 & Learn Current affairs

### **Activity**

Draw & paste 5 photos of yoga in PD notebook.

## **COMPUTER:-**

Revise Ch- 5 & 6

### **Practical (for 10 marks):-**

Do practice of MS Word (using Word Art & Shapes)

## **DRAWING:-**

\* Make one 3D Flying Bird with colourful sheet

