

Inspiration Sr. Sec. School
Holiday Homework (Summer Break)
Class-III

Subject – Mathematics

A. Choose the correct options:

1. What is the place value of the 8 in the number **3686**.

- a) 80 b) 8 c) 8000

2. The largest 4- digit even number is the following:

- a) 9000 b) 9998 c) 9999

3. The smallest 4-digit number formed by the digit 5,0,7,9 is

- a) 5097 b) 5079 c) 9705

4. A three digit number is to be formed from three different digits. What should be filled in the

7		8
---	--	---

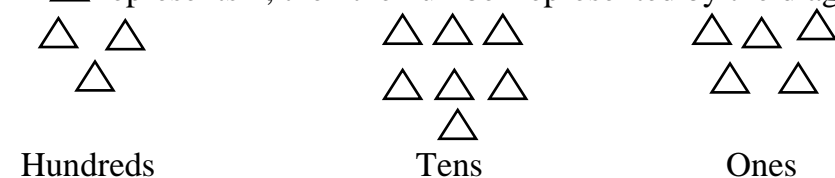
 blank from the given options to make it the biggest number?

- a) 4 b) 8 c) 6

5. 56 is written in Roman Numerals as

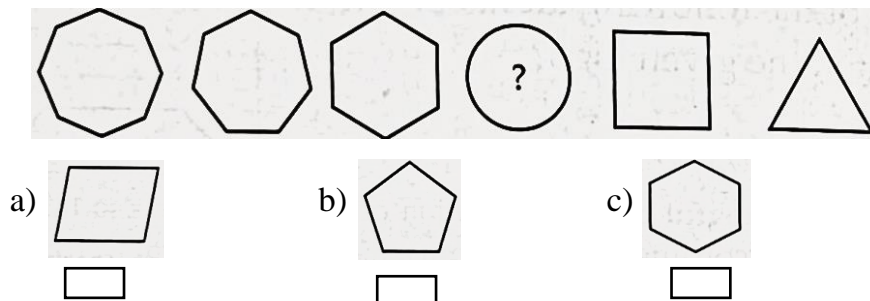
- a) XXXXXVI b) LVI c) LIV

6. If \triangle represents 1, then the number represented by the diagram is




- a) 375 b) 357 c) 573

7. Find the missing figure which completes the series below.



8. Complete the pattern:





9. If day after tomorrow will be Tuesday, then day before yesterday was

- a) Saturday b) Friday c) Sunday

10. Find the value of P, Q, R, S respectively.

$$\begin{array}{r} 2 \quad 3 \quad R \quad S \\ + \quad P \quad Q \quad 7 \quad 8 \\ \hline 5 \quad 9 \quad 1 \quad 0 \end{array}$$

- a) 2, 3, 5, 3 b) 2, 3, 5, 1 c) 3, 5, 3, 2

11. Answer the following:




a) _____ comes just before 870.




b) _____ comes just after 489.

c) _____ comes between 919 and 921.

d) $943 = \square \text{ H} + \square \text{ T} + \square \text{ O}$

e) $3 \text{ hundreds} + 7 \text{ tens} = \square$

f) _____ is the smallest amongst   

g) _____ is the biggest amongst   

h) $17 + 5 = \square$

i) $990 + \square = 990$

j) $6229 + \square = 6230$

12. Write the number names for the given numbers.

- a) 7912 b) 8707 c) 2330

13. Write the numbers in ascending order.

a) 6134, 7143, 7413, 4137, 6143

b) 8007, 7008, 7080, 8070, 8700

c) 7128, 4127, 1742, 4721, 7821

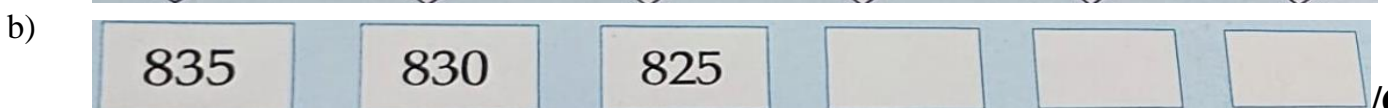

14. Write the numbers in descending orders.

a) 7785, 5877, 7857, 8577, 5787

b) 3892, 3961, 3691, 4001, 4100

c) 2506, 2650, 2056, 2755, 2575

15. Complete the sequence.



c)



16. Write the roman numerals for the following:

a) 15

b) 34

c) 54

d) 65

e) 48

f) 93

17. Write the following in Hindu -Arabic numerals:

a) VII

b) XLIX

c) XXVII

d) XII

e) XVCII

f) LXV

18. Add the following:

1.

$$\begin{array}{r} 4590 \\ + 3241 \\ \hline \end{array}$$

3.

$$\begin{array}{r} 6385 \\ + 2462 \\ \hline \end{array}$$

5.

$$\begin{array}{r} 7864 \\ + 2929 \\ \hline \end{array}$$

2.

$$\begin{array}{r} 1941 \\ + 4382 \\ \hline \end{array}$$

4.

$$\begin{array}{r} 8050 \\ + 1770 \\ \hline \end{array}$$

6.

$$\begin{array}{r} 1964 \\ + 1465 \\ \hline \end{array}$$

19. Subtract the following:

1.

$$\begin{array}{r} 7810 \\ - 3569 \\ \hline \end{array}$$

3.

$$\begin{array}{r} 5924 \\ - 1779 \\ \hline \end{array}$$

5.

$$\begin{array}{r} 7320 \\ - 4749 \\ \hline \end{array}$$

2.

$$\begin{array}{r} 8640 \\ - 6480 \\ \hline \end{array}$$

4.

$$\begin{array}{r} 9601 \\ - 4379 \\ \hline \end{array}$$

6.

$$\begin{array}{r} 3824 \\ - 1282 \\ \hline \end{array}$$

20. Fill in the boxes:

a) $8 \times 9 =$

b) $6 \times 8 =$

c) $11 \times 6 =$

d) $5 \times 7 =$

e) $10 \times 9 =$

f) $12 \times 4 =$

g) $9 \times 6 =$

h) $7 \times 7 =$

i) $4 \times 8 =$

j) $7 \times 9 =$

21. Solve the word problems:

- a) Radha had 269 envelopes and she bought 163 more. How many envelopes does she have now?
- b) Our school library has 5634 Hindi books and 1598 English books. How many books are there in the library?

Subject – Social Studies

1. Create a model of a hut using ice-cream sticks and straw.
2. Make a chart on our national symbols .
3. Write states of India and their capitals.

Subject - Computer Science

Collect the following pictures and paste them on A4 pastel sheet

- Input and Output devices.
- Storage devices.

Subject – English**1. Read the passage carefully and answer the Following questions:**

A mammal is an animal that breathes air, has a backbone and grows hair at some point during its life. In addition, all female mammals have glands that can produce milk. There are 5,000 species or kinds of living mammal. Mammals range in size from a tiny bat to a huge whale. Mammals are warm- blooded. This allows mammals to live in a wide range of climates. They have highly developed brains. Their brain allows mammals to learn from experience and adapt their behavior. Most mammals live on land-on the ground, in trees, or even underground. Some mammals –including otters, beavers, and seals- live on land and in the water. Whales, dolphins and manatees are mammals that spend their whole life in water.

1. What does a mammal breathe?
2. What can a female mammal produce?
3. What is the size of a mammal?
4. What do mammals like whales and dolphin live?
5. In what temperature can a mammal survive?
6. Write antonyms of the given words from the passage:
a) cold- _____ b) many- _____

2. Read the poem carefully and answer the questions:

When the earth is turned in spring
The worms are fat as anything

And birds come flying all around
To eat the worms right off the ground

They like worms just as much as I
Like bread and milk and apple pie.

And once, when I was very young
I put a worm right on my tongue.

I didn't like the taste a bit.
And so I didn't swallow it.

But oh, it makes my Mother squirm
Because she thinks I ate that worm!

Answer the following questions:

1. When are the worm's fat?
2. Who eat the worms?
3. Write the meaning of 'squirm'.
4. Why does the mother squirm?
5. Name the food items which has been mentioned in the poem?
6. Fill in the blanks:

The poet is talking about the _____ in the poem. They get fat in _____ season. They are like _____ and _____ for the birds. The poet doesn't like the _____ of the worms. His mother thought that he has _____ the worm.

7. Write the opposites of the following from the passage:

a) Thin _____ b) wrong _____ c) old _____

3. Write 1 page daily of cursive writing book.

4. Choose the word that is most nearly opposite in meaning to the word in capital letters.

- | | | | |
|-------------|--------------|----------|--------------|
| 1. UP | A. down | B. above | C. inside |
| 2. GIVE | A. share | B. take | C. release |
| 3. LARGE | A. huge | B. big | C. small |
| 4. UNHAPPY | A. glad | B. sad | C. calm |
| 5. ANGER | A. happiness | B. rage | C. stupidity |
| 6. MIDNIGHT | A. evening | B. noon | C. yesterday |
| 7. FAT | A. short | B. thick | C. skinny |

8. BUY	A. sell	B. have	C. hold
9. QUIT	A. stop	B. end	C. start
10. TIGHT	A. free	B. loose	C. firm

Subject – Science

Take a whole chart paper and write the safety rules which we should follow:

- At school,
- In the playground.

Subject – Hindi

उमंग पुस्तक से

पाठ 19— निबंध लेखन (मेरा प्यारा घर) पृष्ठ सं० 71 (हिंदी व्याकरण कॉपी में करें)

पाठ 20— कहानी लेखन (करके देखो) पृष्ठ सं० 76

बिंदु— प्यासा कौवा। एक घड़ा दिखा। पानी था कम।। घड़े में पत्थर डाले। पानी ऊपर आया। कौए ने प्यास बुझाई। (अब बिन्दु देखकर कहानी पूरी लिखो और कहानी का शीर्षक भी लिखिए।

लेखन—पाठी सुलेख

लेखन—पाठी पुस्तिका में रोज एक पृष्ठ सुंदर लेख में करें।