

Inspiration Sr. Sec. School
Holiday Homework (Summer Break)
Class-V

English

- Q1. Do daily one page writing in English Cursive Writing book.
- Q2. Do comprehension passage on page 180 Question 1,3,4 and page 182, Question 1,2,4,6 in your notebook.
- Q3. Read your small English Literature Story book and write summary of any two stories on your own.
- Make one separate notebook for holiday homework.

Hindi

- 1- सुलेख पुस्तक में, 1 से लेकर 15 पृष्ठ (page) तक सुंदर लेख में लिखें।
- 2- पृष्ठ (page) न० 88 से ' समय का सदुपयोग ' विषय पर निबंध लिखें।(निबंध हिंदी व्याकरण की कापी में लिखें।)

Science

1. Make a first aid box using all the materials available at home. Write down the names of material, kept inside, on the lid of the box.
2. Paste the pictures of 15 Indian whole spices on a chart and write their Hindi and English names.

Social Science

1. On a chart paper draw the language of a map, refer to page no.3 of your Social Studies textbooks.
2. On a political map of India, mark all the states and capitals. Paste this map on the blank side of your SST notebooks. Write the names of all the states and capitals on the ruled side.
3. Note down the temperature of your city/ town continuously for two weeks. Do it on an A4 sheet and put your name and class at the back of it.

Computer Science

Collect information about any 5 voice assistant tools. Write 2 lines about them and paste their pictures.

(Do in A4 sheet paper)

Mathematics

Note- Do the given work in separate note book.

Q1. Read the given numerals and write their number names.

- a. 2,00,000 b. 9,00,070

Q2. Write the numerals for the following.

- a. Twelve lakh four hundred five.
b. Three hundred ten thousand four.

Q3. Write the face value and place value of the underlined digits?

- a. 47,32,695 b. 39,60,780

Q4. Write the given numbers in the descending order.

- a. 852,632;830,632;845,632;829,632
- b. 3,33,508;3,26,731;3,33,961;3,26,407

Q5. Find a number to complete the blanks. Choose from the box.

50,330	46,800	20,272	51,314	19,310	20,710
--------	--------	--------	--------	--------	--------

- a. $46,812 < \square < 51,214$
- b. $1,9221 < \square < 19,416$
- c. $54,703 > \square > 50,654$
- d. $20,713 > \square > 20,601$

Q6. Write the successor and predecessor of 3,10,000.

Q7. Write the number names for the given numbers according to the Indian system of numeration.

- a. 5,29,607
- b. 3,17,00,009

Q8. Put commas according to the International system of numeration and write the following in words.

- a. 38675260
- b. 80000000

Q9. Write the numerals for the following.

- a. Five crores eighty lakhs five hundred four
- b. Thirteen lakhs thirteen

Q10. Write the expanded form of the given numbers.

- a. 14,857,054
- b. 4,19,26,415

Q11. Write the next two numbers in each series.

- a. 63,198;63,199
- b. 7,21,583;7,21,593

Q12. Fill in the blanks.

- a. 1 more than 4,31,26,676 is _____
- b. 200 more than 8,63,15,835 is _____
- c. 50 less than 80,35,300 is _____
- d. 7000 added to 1,372,315 is _____
- e. 2 lakh less than 5,70,51,010 is _____

Q13. Write the sum of the greatest 6- digit number and the smallest 7- digit number.

Q14. Round off to the nearest tens.

a. 161

b. 5,409

Q15. Round off the following numbers to the nearest thousands.

a. 5,16,497

b. 97,997

Q16. Find the sum.

a. $7,090 + 9,82,009$

b. $65,709 + 33,265$

Q17. Find the difference.

a. $64,336 - 6,464$

b. $97,714 - 89,634$

Q18. Solve the following.

a. Find the difference when the minuend is 3,00,10,020 and the subtrahend is 4,13,629.

b. Subtract 8,47,685 from 90,08,875.

Q19. Find the missing digits in each of the following.

a. TL L TTh Th H T O

4 9 7 7 1 8 4
+ 3 _ _ _ _ 9

b. TL L TTh Th H T O

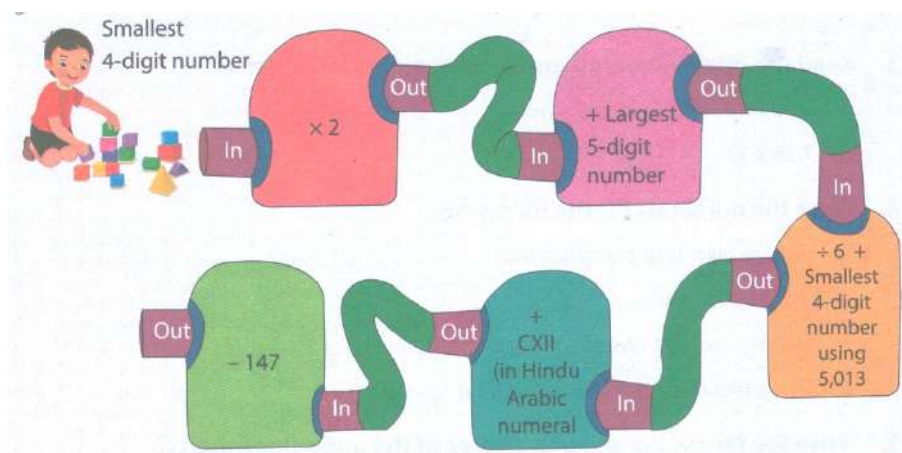
2 1 2 0 1 3 5
- _ _ 6 5 _ _

Q20. Solve the following-


a. The sum of two numbers is 49,07,584. If one of the numbers is 34,69,396 find the other number.

b. A Computer and a printer together cost Rs. 2,74,760. If the computer cost Rs. 1,59,899, find the cost of the printer.

Q21. Visit to a number factory.



Q22. Study the given table and list the planets in descending order of their approximate radius. What do you observe?




Planet	Radius in kms.(Approx.)
Neptune	2,46,22,000
Saturn	5,82,32,000
Venus	60,52,000
Mercury	24,40,000
Earth	63,71,000
Jupiter	6,99,11,000
Uranus	2,53,62,000
Mars	33,90,000







Sanskrit

नोट— निम्नलिखित दिए गए कार्य को अपनी संस्कृत कॉपी में करें।

चित्र बनाकर निम्नलिखित चित्रों के नाम संस्कृत, हिंदी और अंग्रेजी भाषाओं में लिखिए।

चित्र	संस्कृत	हिंदी	अंग्रेजी
	कमलम्	कमल	Lotus
	खजूरः	खजूर	Dates

	गजः	हाथी	Elephant
---	-----	------	----------

	घटः	घड़ा	Pitcher
	चक्रम्	पहिया	Wheel
	छत्रम्	छाता	Umbrella
	जलम्	जल	Water
	झरः	झरना	Waterfall
	डमरः	डमरु	Pellet Drum
	तरुः	पेड़	Tree