

SHARDA INTERNATIONAL SCHOOL, SECTOR 9



SUMMER HOLIDAY HOMEWORK(2025 – 26) CLASS 3RD

NAME- _____



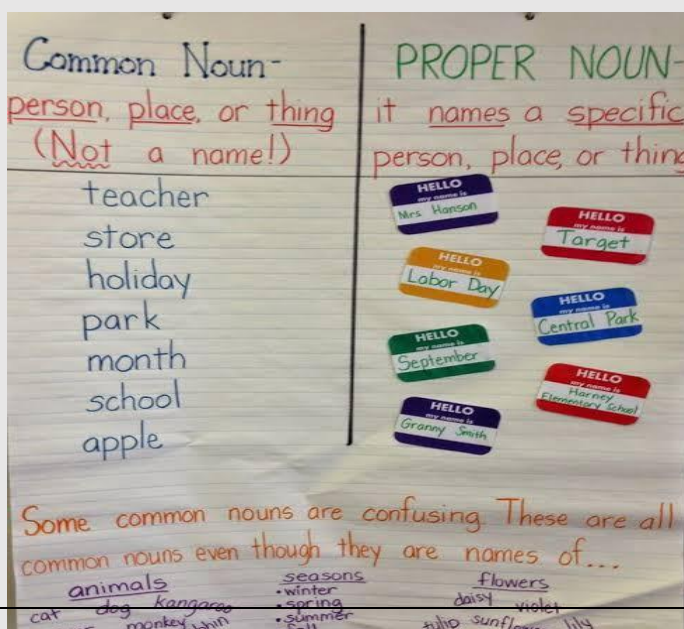
Dear students, make use of your time judiciously. Showcase your creativity and present your work immaculately.



- All information should be hand written.
- Parents are requested to guide the children & ensure that they do a lot of reading of books and newspapers to enhance the vocabulary. Take them to at least one historical / scientific/ museum /zoo to increase their knowledge.
- Original drawings/ illustrations and creative use of the material will be appreciated.
- Put all your work together in an attractive big folder with your name and class clearly written at the top. All the homework has to be done neatly. Exhibit your creativity by designing the cover page of the folder.
- Kindly submit all work by 4 July, 2025.
- **Learn PT 2 syllabus in all subjects.**

ENGLISH

1. Write a short note on: 'What do you like about summer vacations' and draw some pictures along with it. (on A4 size sheet)
2. Complete English Cursive writing till page no- 40 (ONE PAGE DAILY). Mention date and day at the top of the page.
3. Learn poem 'The Silly Pink elephant' with actions.
4. Activity: -
 - a) Make a chart of common noun and Proper noun. For your reference-



b) Make a dictionary of your own-

i) Make a list of 20 new words that you see, hear or read. Arrange the words in alphabetical order.

ii) Write the meaning of these words.

iii) You can also paste or draw a small picture along with the meaning.

5. Do the given assignment in the printout pages only.

Assignment

Q-1 Read carefully the passage given below.

The hillside is quiet and beautiful. One can hear the sound of the birds chirping, the river flowing and the wind blowing. The mountains are brown in colour. But some mountains have white snow on the top.

The bright yellow sun rises from between the mountains. The river flows down the mountain and is deep blue. The water also has many fish in them. These fish are both big and small. Most of the fish are red and green in colour.

There are many houses on both sides of the river. Several people live in these houses. These people walk along the river and enjoy Mother Nature.

Now answer the following questions form the passage:

1. What can you hear on the hillside?

2. Why are some mountains white on the top?

3. What do the people do?

4. What rises in between the mountains?

5. Write any two Noun given in the passage: - _____

Q.2 Read the below passage carefully.

One Sunday morning Seema, Harita and Asha went for a picnic by the side of a lake. They carried picnic baskets with a lot of food and water for the day. Each one of them was excited as their mother had made tasty food for them. "Let us first play in the water and then we will eat," said Harita. "Yes, yes", echoed Seema and Asha. There was very little water in the lake. It was safe for them to dip their feet in the water, so they took off their shoes and ran into the cool water. They played and laughed and chatted in the water. After some time they were hungry and decided to have lunch. "Oh no!" all three shouted. They were almost in tears. A goat had eaten all their food from the picnic baskets.

Seema, Harita and Asha tried to chase away the goat, but they suddenly began to laugh because the goat was too full to even run away. Someone was hungrier than they were!

Answer the following questions: -

1 Where did the three girls go one Sunday morning?

2. What did they carry for picnic?

3. Why were they in tears?

4. Find a word in the passage that is opposite in meaning to dangerous: _____

5. Complete the sentence:-

a) Seema, Harita and Asha tried to chase _____.

b) A goat had eaten all their food _____.


c) Let us first play in the water and _____

Q.3 Look at the picture carefully and write some lines on it.




a)

b)



MATHS

1) Prepare a project of 4-digit numbers. For your reference -



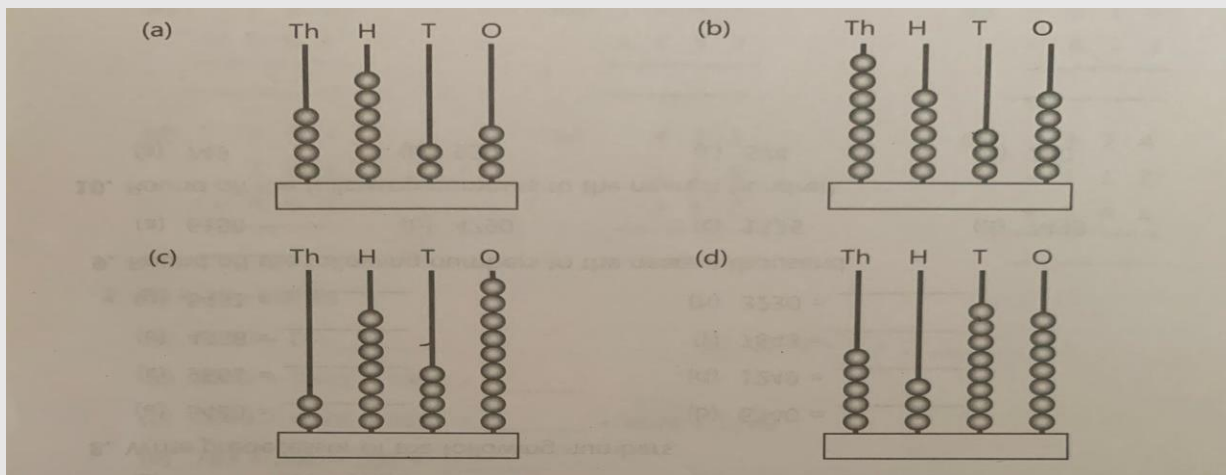
(Use flash cards from your Math kit)

2. Learn tables 2 to 20.

3. Do the given assignment in the printout pages only.

Assignment

Q.1 Write the numbers shown on the abacus.



2. Counting by five's, write the numerals.

(a) 6590 _____ , _____ , _____ , _____

(b) 2450 _____ , _____ , _____ , _____

(c) 5235 _____ , _____ , _____ , _____

3. Write the place values of 7 in each numeral.

(a) 5793

(b) 7621

(c) 3497

4. Write the following numerals in expanded form.

(a) 9438 =

(c) 7943 =

(b) 2156 =

5. Fill in the blanks with $<$, $>$ or $=$.

(a) 4329 ____ 3492

(b) 6503 ____ 5630

(c) 5320 ____ 5320

(d) 4539 ____ 9354

6. Write the following numerals in descending order:-

(a) 2569, 5387, 7320, 8951 Ans- _____

(b) 1235, 5392, 6780, 3457 Ans- _____

7. Write successor of the following numbers.

(a) 8679 = _____ (b) 5709 = _____ (c) 1250 = _____

(d) 7320 = _____ (e) 4327 = _____ (f) 6483 = _____

8. Write predecessor of the following numbers.

(a) 3840 = _____ (b) 6340 = _____ (c) 9561 = _____

(d) 1249 = _____ (e) 4356 = _____ (f) 7843 = _____

9. Round off the following numbers to the nearest thousand.

(a) 6150 = _____ (b) 4790 = _____ (c) 1525 = _____

10. Round off the following numbers to the nearest hundred.

(a) 1749 = _____ (b) 4950 = _____ (c) 6574 = _____

11. Fill in the blanks.

(a) The result of addition is called _____

b) 14 hundreds – 2 tens = _____

c) $285 + 0 =$ _____

d) If we add 0 with any number, we will get the _____ number.

e) 0,1,2,3,4,5 are called _____ numbers

f) Hundreds more than 8210 = _____

g) _____ form tells the place value of all digits in number.

h) _____ number has same place value and face value.

i) The smallest 4-digit number is _____

j) Greatest 4-digit odd number is _____

k) $5230 + 0 =$ _____

l) $783 + 291 = 291 +$ _____

m) $8972 + 5341 = 5341 +$ _____

n) $3421 - 3421 =$ _____

o) _____ - 4536 = 0

11. Write in columns and add the following numbers.

a) $8543 + 1240 + 234$

b) $2890 + 234 + 100$

c) $1200 + 1892 + 1128$

12. Estimate the sum/difference to the nearest hundred.

a) $551 + 198$

b) $625 - 374$

c) $982 - 187$

13. Write in column and subtract the following: -

a) 2892 from 3000

b) 298 from 1500

c) 6732 from 8932

14. Story sums: -

a) There are 950 Mangoes on first tree, 1000 Mangoes on the second tree and 527 Mangoes on the third tree. How many Mangoes are there in all?

b) At a birthday party, there are 200 children, 98 Women and 50 Men. How many people are there in the party?

c) 526 people were watching film in a cinema hall. Total number of seats were 1000. How many seats were vacant?

d) Ananya had Rs. 5000 in her purse. She has paid Rs.2360 for a set of table and chair. How much money left with her.

e) A shopkeeper had 790 eggs, he found that 350 eggs were broken. Find out the number of unbroken eggs left with him?

EVS

1. Project presentation:

You have been assigned a project, which is specified next to your name.

Please work on your assigned project during the summer break and ensure that it will present in an organized manner. The presentation of these projects will take place after the summer break. Please make sure that your project is well-prepared and ready for presentation.

Roll no.	Student's Name	Project name
1.	Ananya	Sense organs
2.	Swarit	Body parts of a bird
3.	Reyansh	Types of Plants
4.	Nivansh	Parts of leaves
5.	Priyanshi	Herbivores animals
6.	Arzaan	Water cycle
7.	Kanishk	Omnivores animals
8.	Harshit	Carnivores animals
9.	Mairin	Body parts of a bird
10.	Lakshit	Balanced diet
11.	Navya	Types of food
12.	Ruchit	Omnivores animals
13.	Shrika	Forms of water
14.	Diksha	Carnivores animals
15.	Ketan	Types of houses
16.	Anaya jain	Means of transport
17.	Keshav	Means of communication
18.	Avishka	Rain water harvesting
19.	Himanshu	Methods of cooking
20.	Gunvara	Special houses – Silt, Tents, Houseboat etc.
21.	Yugansh	Types of plants
22.	Fiyanshi	Herbivores animals
23.	Advik	Balanced diet
24.	Kiaan	Forms of water
25.	Avni	Methods of cooking
26.	Kartik	Water cycle
27.	Yonit	Parts of leaves
28.	Pranshu	Rain water harvesting
29.	Akshit	Sense organs
30.	Ansh	Types of houses
31.	Bhaavesh	Special houses – Silt, Tents, Houseboat etc.
32.	Poshita	Parts of Insects
33.	Vartika	Indoor and outdoor games

34.	Vani	Means of communication
35.	Dhruv	Types of houses
36.	Neelansh	Means of transport

For Project Reference-



G.k

- Learn all exercises which have been done in the class.

Value Education

- Read lesson 1,2,3 & 4

Art

- Do page no.- 8,15,19,32 in art book.
- Craft-- Make 1 duster using best out of waste materials.

Computer

Theme: Input and Output Devices

- Make a chart of 4 input and 4 output devices (draw or paste pictures).
- Write 3 rules for safely using a computer. (Do in I.T notebook)
- Practice typing 3 lines in WordPad or Notepad every day (e.g., My favorite hobby is...).
- Learn and write any 5 keyboard shortcuts (e.g., Ctrl + C = Cop) (Do in I.T notebook)



