

Holiday home work of Maths

Class -5th

Learn and write table 2 to 20 (10 Times)

Q1 Write 29,73,40,000 in the expanded form .

Q2 Write the greatest 8-digit number using the digit 0,1,2,3,4,5,6,7 without repeating the digits .

Q3 Write the predecessor and Successor of 9,52,10,736 .

Q4 Write the number 27349811 in the international place value system .Also write it with commas and in words.

Q5 Round off the following numbers to the nearest 1000 .

1. 9211
2. 28,564
3. 65,932

Q 6 The distance between two planets is 3,50,000 km . A spaceship between the planets has covered 1,05,342 km . What distance is left for it to travel?

Q 7. A set of books cost rs 1459 .A School ordered 375 such sets . How much did the School pay ?

Q8 . There are 98,800 books in a library . How many shelves are there in the library , if 400 books can be kept on 4 shelves ?

Q 9 The sum of two numbers is 342 . If one number is 195, find the other one .

Q 10 . A number when divided by 13 gives the quotient 109 . Find the number .

Q 11 Convert to Roman numbers

1. 133
2. 246

Q 12 Convert to Hindu – Arabic numbers .

1 XXIV 2 CXLV 3 CCCXI 4 CDL 5 CDLXI

Q 13 Which of the following are meaningless?

1. VL
2. IVC
3. IXX
4. XCI

Q14 Find the missing numerals to make the statement correct ?

1. XV+ ____ = XX 2. XX+ ____ =XXXV 3. ____ +XV =XLV 4. XXX - ____ =XX

Q 15 Compare the numbers using (<,> or=)

1. XXXV [] 28
2. XXIX [] 36
3. XVIII [] 15
4. XVII [] 17

Q 16 Round off 2872179 and 3542821 to the nearest 10 , 100 and 1000 .

Q 17 My father bought a house for rs 7845321 . Round off the Cost of the house to the nearest 100 .

Q 18. Round off the following to the nearest 10 .



1. 5314 2. 1235 3. 83489

Q 19 . Round off 92628510 to the nearest lakh .

Q 20 . Round off 72518315 to the nearest ten thousand .

Mental Maths

Q 21 . Add 5×8 to 7×3

Q 22 . What is $(120 \div 10) + (140 \div 14)$?

Q 23 . How many more than 28 is 13×7 ?

Q 24 . How many days are there in September and October together ?

Q 25 . Draw the next shape in the sequence



Q 26 . Write down the next number

8, 10, 12, 14, 16 __, __, __

Q 27 . Write a 7 - digit number, which can be rounded off as 83,14,000 to the nearest 1000 .

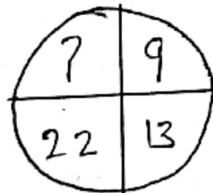
Q 28 . Write down all the prime numbers between 30 and 40 .

Q 29 . How many 50s make 200 ?

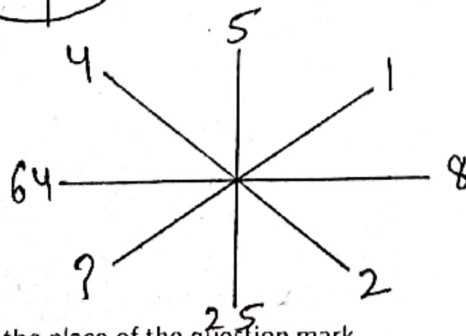
Q 30 . 425372 people travel by the company's plane in a month. The manager wants to round off this number to the nearest 100. What is the least number of people , who should fly to travel ?

Maths Puzzles

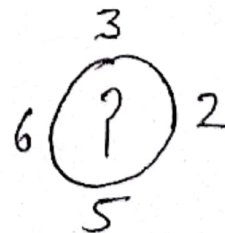
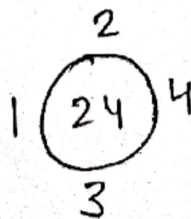
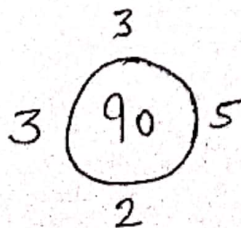
Q 31 Find the missing character



Q 32 . Find the missing character



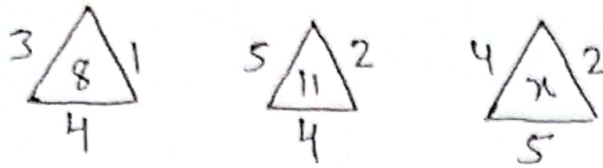
Q 33 . Find the missing number in the place of the question mark .



Q 34. Complete the series

5, 10, 15, 20, ?, 30, 35, ?, 45

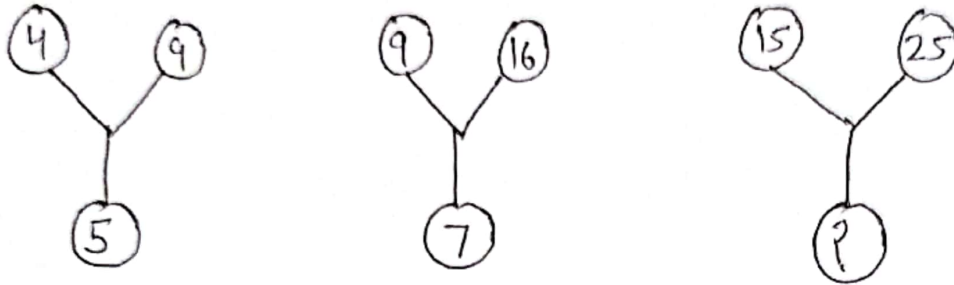
Q 35. What is the value of X



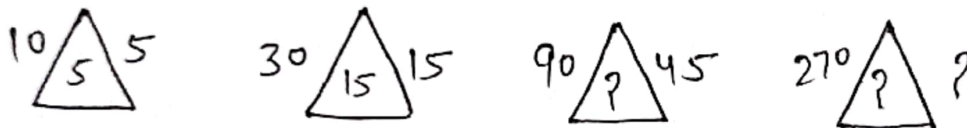
Q 36. Which of these numbers is a multiple of 10 ?

26, 32, 20, 55, 40, 12

Q 37. What number come on the place of question mark



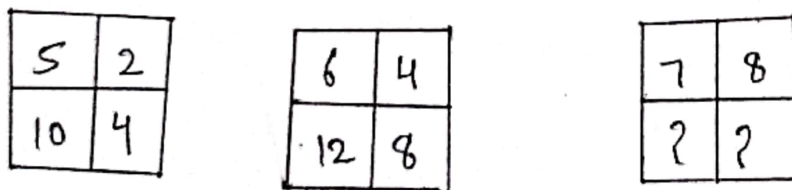
Q 38. What number come on the place of Question mark



Q 39. Find odd one out in the given numbers

2, 8, 11, 14, 16

Q 40. What number come on the place of Question mark



ART INTEGRATED PROJECT

Sports (game) of Telengana

(Describe any one game)

ACTIVITY

- 1) Write your whole family members mobile number in Indian and international system and make a chart .

- 2) Write the age of your family members in Roman numerals. Also arrange in ascending and descending order .(On A4 size sheet)

Model

- 1) Make a working model of place value of Indian and International system of Numeration.
- 2) Make a model of Roman Numbers (using matchstick or toothpick)

