



Maths Holiday Homework

Class - V

- * Learn and write tables 2 to 20 (10 times)
- * All questions are compulsory.
- * Work should be neat and clean.

Q1 Rewrite the number using commas. Also write the numbers in words.

889570

Q2 Write the Number. Mark the periods with commas.
Seven lakh twenty two thousand one hundred two.

Q3 Write the number for ninety lakh nine.

Q4 Write the expanded form of 95210736.

Q5 Make the smallest and greatest numbers using the given digits: 1, 8, 3, 0, 2, 7, 5

Q6 Write the successor of 17,35,000.

Q7 Write the standard form of $60,000 + 20 + 8$

Q8 Write in words.

1,500,273

Q9 Round off 14372, 14560 and 14875 to the nearest 1000.

Q10 Convert to Roman Numbers.

(i) 146

(ii) 439

Q11 Convert to Hindu-Arabic numbers

(i) CXXXI

(ii) CCLXVII

Q12 Write in Column and find the sum.

$$53248 + 7346 + 989$$

Q13 Find the sum of the largest and the smallest 5-digit Number.

Q14 Subtract 2745 from 6518.

Q15 Multiply 752 by 402

Q16 Divide 7728 by 35 and check the answer.

Q17 Simplify:

$$10 + 8 \div 4 - 2 \times 6$$

Q18 What should be added to 756 to get 1300?



Q19 When a number is divided by 12, the quotient is 15 and the remainder is 10. What is the number?

Q20 Compare using sign $<$, $>$, $=$

(i) $3 \times 7 \times 10 \square 30 \times 7 \times 1$

(ii) $4 \times 5 \times 0 \square 2 \times 10$

Mental Maths and PUZZLES

Q21 Add 6×7 to 5×3

Q22 What is $(120 \div 10) + (140 \div 14)$?

Q23 How many days are there in April and May together?

Q24 How many 10s make 100?

Q25 Write down all the prime numbers between 30 and 40.

Q26 How many lakhs is one crore?

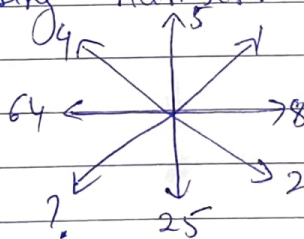
Q27 One million is equal to how many lakhs?

Q28 What is the smallest 8-digit number called?

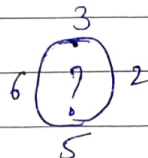
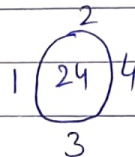
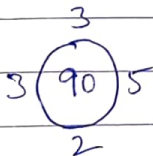
Q29 What is the smallest 6-digit number formed using the digits 9, 4, 0?

Q30 What number will you get on adding 1 to the greatest 5-digit number?

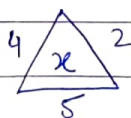
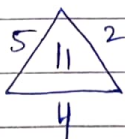
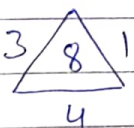
Q31 Find the missing number



Q32 Find the missing number in the place of the question mark.



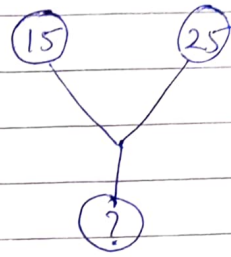
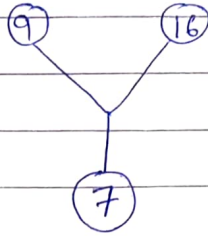
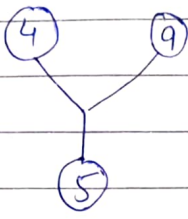
Q33 What is the value of x .





DATE _____

Q34 What numbers come on the place of question mark



Q35 Find odd one out in the given numbers
2, 8, 11, 14, 16

Activity


Q36 Prepare a model on Roman Number from 1 to 10 with the help of match stick.

Q37 Write your whole family members mobile number in Indian and in International system.

Q38 Prepare a chart of numbers from 1 to 100 and colour the even and odd numbers with two different colour.

Q39 The cost of 11 notebooks is ₹154. Find the cost of 135 such notebooks?

Q40 Join the dots to get an aquatic animal.



* Art Integrated Project

Art, Music and Dance of Manipur.

Holiday

Homework

SCIENCE

CLASS- V

Dear Parents & Students

Vacation is an excellent time to learn new skills. It is a welcome break for the children to enjoy and explore things in their own way. Here are some interesting and fun-filled activities for the children to learn and keep them occupied during the holidays.

Do the holiday homework on loose sheets.

Question 1. Answer the following question:

- i) Dandelion seeds are dispersed by wind. Why?
- ii) List the condition necessary for germination?
- iii) How are seeds of a plant dispersed?
- iv) What are the different types of crops grown in different season?
- v) Define sublimation? Name two substance that sublime?
- vi) What is the respiratory organ in:- a) Fish b) Earthworm c) Frog d) Insects?
- vii) Name two animals that can live in water as well as on land?
- viii) What is the significance of long legs of a camel?
- ix) What is evaporation?
- x) Define aestivation? Name two animals that goes through estivation?

Question 2. Draw a flow chart on different kind of organism basing upon the food habits with examples.

Question 3. Paste different kind of seeds in A4 size paper and classify them as monocot and dicot.

Question 4. Paste the picture of camel and write the function of its different body parts.

Question 5. Prepare a chart on healthy food and junk food.

Question 6. Prepare a model on arrangement of molecule in solid, liquid and gas.

Question 7. Revise the explained chapters with all extra question – answer.



Edit with WPS Office



Edit with WPS Office

ग्रीष्मावकाश गृह कार्य(2023-24)

कक्षा- पाँचवीं

विषय- हिंदी

प्रश्न 1. आप बड़े होकर क्या बनना चाहते हैं और क्यों? लघु अनुच्छेद के रूप में लिखिए।

प्रश्न 2. देश को आजाद करवाने में अनेक वीरों ने अपने प्राण दे दिए किन्हीं छह वीरों के नाम लिखकर, चित्र बनाते हुए उनके विषय में A-4 साइज शीट पर लिखिए।

प्रश्न 3. वृक्षों के पृथ्वी पर होने से पृथ्वी कैसी है और न होने पर पृथ्वी कैसी होगी? दोनों रूपों का आकर्षक चित्र बनाते हुए चार- चार वाक्य लिखिए।

प्रश्न 4. शरीर के अंगों आंख, कान, नाक, मुंह से संबंधित तीन- तीन मुहावरे लिखिए ।

प्रश्न 5. हमारा 'तिरंगा' हमारे देश की शान है ! इसका चित्र बनाइए तथा चित्र के नीचे संदेश लिखिए जो इसके अलग-अलग रंग हमें देते हैं ।

प्रश्न 6. मणिपुर के नृत्य और संगीत के विषय पर 3 से 4 पृष्ठों में परियोजना कार्य तैयार कीजिए।

* इकाई परीक्षा का पाठ्यक्रम याद ककीजिए।

* प्रतिदिन अपनी पाठ्य पुस्तक से 10 शब्द सुलेख लिखिए ।

CLASS-5.

ENGLISH HOLIDAY HOMEWORK.

- Make An attractive A-4 Size folder to keep your holiday H.W. in it.
- Make a collage of any 4 festivals you which you like the most
- (collage and paragraph should be written on A-4 size pastel sheet)
- Write 40 new words along with their meaning under the heading 'OPEN DICTIONARY' on A-4 Size sheet.
- 1 page of writing to be done daily in a small note book. Mention dates.
- Download the worksheet posted on E-care and complete it. Submit it along with English H.W.

ART INTEGRATED ACTIVITY (MANIPUR)

All the work has to be done on A-4 sized sheet and decorated accordingly.

- 1) Paste 5 pictures of different dance forms of Manipur along with their names and forms.
- 2) Paste 5 different pictures of musical instruments used in Manipur. Write their names and name the famous musicians who played them.
- 3) Write a paragraph of any one festival of Manipur along with pictures and decorate it accordingly.
- 4) Paste different items made from bamboo and write a paragraph about them.
- 5) Paste picture of a famous folk dance of Manipur and write a paragraph about it.
(Who performs, when is it performed and its religious importance)

Holidays Home work for class 5

SUBJECT ENGLISH

1. Make an attract A4 size folder to keep your holiday homework in it .
2. Make a collage of any four festivals you celebrate and write which festival do you like the most and how do you celebrate it...collage and paragraph should be written in A4 size pastel sheet .
3. Write 40 new words along with their meanings under the heading 'open dictionary' on A3 size sheet and decorate it.
4. Write one page of writing to be done daily mention the dates in it .(in a small notebook .)
5. Download the worksheet posted on E.Care .complete it and submit it along with English homework .

**6. Art Intergrated Activity
On Manipur.**

Note :All the work have to be done on A4 sized sheet and should be decorated accordingly.

1. Paste five pictures of different dance forms of Manipur along with their names and forms.
2. Paste five different pictures of musical instruments used in Manipur with their names and name the famous musicians who play them.
3. Write a paragraph of anyone festival of Manipur along with their pictures and decorate it accordingly.
4. Paste different items made from bamboo(pichma) and write about them in a paragraph.
5. Paste pictures of famous folk dance of Manipur and write about it .(who perform when is it performed and its religious importance)

SHARDA INTERNATIONAL SCHOOL

HOLIDAY HOMEWORK (2023-24)

CLASS-5

SUBJECT-S.ST

1. The famous passenger ship RMS Titanic hit the iceberg in the Atlantic ocean and sank in 1912. In A4 size sheet paste the picture of the ship and write more about the ship and the accident occurred.

2. On a black A4 size sheet draw solar system. Use yellow colour table tennis ball cut into half or any other object as sun. Use buttons to show planet. Make orbit using wool.

3. On a A4 size sheet write some ideas to reuse for the following:

a) old clothes b) cardboard boxes c) glass/plastic bottles d) empty shoe box

4. On a chart collect information on any one of the natural disaster paste the picture also:

a) Nepal earthquake (2015)

b) Uttarakhand floods (2013)

c) cyclone Nargis (2008)

d) cyclone Mocha (2023)

5. On a A4 size sheet paste and write about any one personality mentioned in lesson13 write about his life and achievement.

6. Make a poster how to save environment.

7. . Visit to Prime Minister museum and War Memorial during summer vacation and express your views on A4 size sheet.

8. Art integrated project: dresses of Manipur write on A4 size sheet. Paste the picture of the dresses (take the help of Internet

1) In a p h i. (Roll no 1 to 7)

2) phanek (Roll no 7 to 14)

3) Mayek naibi (Roll no 15 to 24)

4)laiphi and Chin phi (Roll no 22 to 28)

5) Dhoti pagri (Roll no 28 to 35)

6) Khaman chapta (Roll no 36 to 40)