



Maths Holiday Homework

Class VI

- * Learn and write tables 2 to 20 (10 times).
- * All questions are compulsory.
- * Work should be neat and clean.

- Q1 Write the Successor of (i) 4799 (ii) 10101
- Q2 Write the Predecessor of (i) 2789 (ii) 53102
- Q3 Write the whole number whose successor is 479500.
- Q4 Write next three consecutive whole numbers of the number 8889
- Q5 Find the Product of the successor and the Predecessor of the smallest number of 3-digit.
- Q6 On dividing 15990 by 290, the remainder is 40. Find the quotient.
- Q7 Which ratio is greater?
4:5 or 2:7
- Q8 Divide ₹ 10,000 between Ramesh and Ravi in a ratio 1:4.
- Q9 Find two equivalent ratio of 5:3
- Q10 Write the ratio for
(i) 1 hr to 40 min (ii) 60 paise to ₹ 2
- Q11 In a Class, there are 20 boys and 40 girls. Find the ratio of
(i) Number of boys to Number of girls.
(ii) Boys to total number of Students.
(iii) Girls to total number of Students.
- Q12 Divide ₹ 40 in the ratio 3:2.
- Q13 Form the greatest and smallest four-digit number using any one of the given digit twice:
1, 9, 3
- Q14 Determine the product of Place value of two 5's in 405165
- Q15 Write the Place value and face value of underlined digit.
3801427



Q16 Write the expanded form of 45.201

Q17 Write in decimal number:

6 tens + 3 ones + 2 tenths + 5 hundredths

Q18 Compare the pairs of decimal number.

(i) 2.735 and 3.1

(ii) 7.77 and 7.87

Q19 Convert into fraction.

(i) 4.25 (ii) 11.25

Q20 Convert into decimal.

(i) $\frac{7}{5}$ (ii) $13\frac{1}{8}$

Mental Maths and Puzzles

Q21 Without repeating any digit, write the smallest and largest possible 5-digit numbers having 7 in tens place.

Q22 Use 8, 5, 9, 4 to find the number with the following conditions:

The biggest digit is in the hundred place.

The 5 is in the ones place.

The 4 is in tens place.

The 8 is in thousand place.

Q23 A medicine dropper contains 0.009 L. Is this less than 1 mL?

Q24 By how much is 8932 cm greater than 9687 mm? Give answer in cm.

Q25 Arrange the measurement in order from smallest to largest.

500 mL, 2 L, 0.04 kL.

Q26 Write all the odd numbers below 10. Multiply any two of them. Is the product an odd number?

Q27 What is the minimum and maximum number of digits in the sum of any two four digit numbers.

Q28 How many whole numbers are there between 71 and 100?

Q29 How many 3-digit whole numbers are there between



82 and 405?

Q30

Which Number will replace the question mark?

$$\begin{array}{c} 2 \\ 1 \text{ (24) } 3 \\ 4 \end{array}$$

$$\begin{array}{c} 1 \\ 5 \text{ (30) } 2 \\ 3 \end{array}$$

$$\begin{array}{c} 2 \\ 4 \text{ (?) } 1 \\ 3 \end{array}$$

Q31 If $40 + 10 = 30$, $18 + 8 = 10$ then $60 + 60 = ?$

Q32 Solve.

$$\square \times \square \times \square = 27$$

$$\square \times \triangle \times \triangle \times \triangle = 24$$

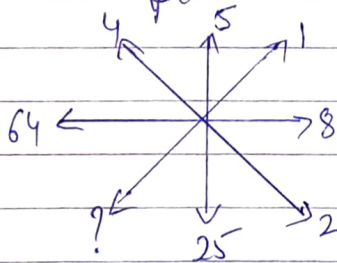
$$\square \times \triangle \times \bigcirc \times \bigcirc = 96$$

$$\bigcirc + \square \times \triangle = ?$$

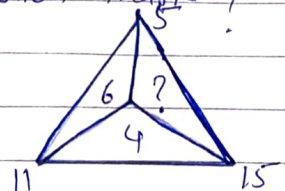
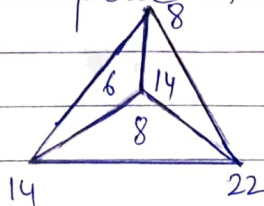
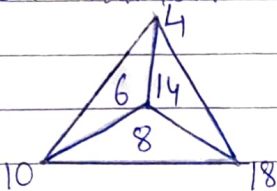
Q33 Which Number will replace the question mark in the following



Q34 Which number will replace the question mark in the following



Q35 Which number will replace the question mark?





Activity

- Q36 Write any five mobile number of your family member. Form the greatest and smallest number by using the digit of a mobile number.
- Q37 Prepare a chart of numbers from 1 to 100 and colour the prime and composite numbers with two different colour.
- Q38 Prepare a chart on topic - Types of Triangle.
(i) According to their sides
(ii) According to their Angles
- Q39 Multiplication of decimals experimentally
→ To represent the product of decimals on 10×10 grid by drawing horizontal / vertical lines and shading
- Q40 Art Integrated Project
* Agriculture and Industrial of Manipur

Holiday Homework

Class 6

- **Use loose sheets to write your answers**

I) Answer the following Questions:-

Q-1) Which vitamin is called sunshine vitamin? State importance of this vitamin.

Q-2) State diseases caused by deficiency of following vitamins, also state symptoms of diseases?

- 1) Vitamin A
- 2) Vitamin B
- 3) Vitamin C
- 4) Vitamin D

Q-3) What is role of roughage in our diet?

Q-4) What is difference between combustible and inflammable materials? Give example of each.

Q-5) Why are handles of cooking utensils made of wood or plastic?

Q-6) Define 1) Herb 2) Shrub 3) Creepers 4) Climbers . Write two examples of each?

Q-7) Why do we need Standard unit of measurement?

Q-8) What precautions should be taken while measuring length?

Q-9) Define oscillatory and vibratory motion with two examples of each?

Q-10) What is criterion of classification of food?

II) Give 4 examples of each leaves with reticulate venation and parallel venation. Make the impression of these leaves with ink on a sheet of paper after drying them?

III) Make a colourful diagram of the following with labeling

- a) Flower
- b) a leaf
- c) Tap roots

IV) Make a dictionary of 50 scientific words .

V) Collect 10 objects from your surroundings . Identify whether these are at rest or in motion . Also identify the type of motion shown by them.

VI) Revise all chapters taught in Class.

HOLIDAYS HOME WORK 2023-24

CLASS- VI

Activity-1

Prepare a project on the Topic

"Major Domains of the Earth" under following headings

- Continents
- Oceans
- Atmosphere
- Biosphere

Activity-2

Prepare a project on the topic Agriculture and Industries of Manipur under the following headings

- 1.Collage of Industries
- 2.Model of Industries
- 3.HandiCraft-paper pasting
- 4.Collage of crops
- 5.paste the different crops of Manipur according to seasons
- 6.P.Pt

Learn chapters of UT-2

- . Visit your village during summer vacations. Observe the following things and write about them.
- . Location of your village or Town.
- .Soil found there.
- .occupations of people.
- . Basic Facilities.
- . life style of people.

CLASS-6

ENGLISH HOLIDAY HOMEWORK

- Make an attractive A-4 Size folder to keep your holiday H.W. in it.
- 1. Write 40 new-words along with their meanings on A-3 sized sheet and decorate it accordingly.

Read the poem “Song of the Whale “and on A-3 size sheet write the theme, poetic devices and rhyme scheme of the poem with illustration.

Revise U.T. 2 syllabus

- 3. Download English worksheet posted on E-care. Complete it and submits it with H.HW

ART-INTEGRATED ACTIVITY MANIPUR

Note: All the work is to be in A-4 sized sheet and decorate it accordingly.

- 1, Draw | Paste any 5 different Horti culture crops and mention in which season they are grown.
- 2) Draw | Paste any 5 different commercial crops with their places, where they are grown.
- 3) Make a collage about the Handloom industry of Manipur along with a small write -up about its history and current status.
- 4) Write a write -up about Handicrafts of Manipur along with its pictures.
- 5) Write a write up about Seri-culture of Manipur along with pictures.

ENGLISH HOLIDAY HOMEWORK (Worksheet)

CLASS 6

1. You are Raman Malik, the head boy of D. A. V Public school, Chandigarh. Your school is organizing a tour of Sikkim. Write a Notice inviting students who want to join the tour. Put the notice in the box. Include the following information in your notice

- ✓ For Classes- VI to VIII
- ✓ Date of departure--2nd june23
- ✓ Date of arrival--6 june23
- ✓ Charges---3000 per head.

Pronouns

1. Underline the correct pronouns.

1. (Him/He) and Firoza caught the most number of fish.
2. Subhash looked for Lorenzo and (her/she) at the party.
3. You and (me/I) had better go.
4. Gracy invited both Vicky and (me/I).
5. The Khans and (us/we) are going in our car.
6. The waitress brought Sugandha and (me/I) the wrong dishes.
7. Mr. Mittal drives Tony and (her/she) to school on Mondays.
8. Why don't you sit between (her/she) and (me/I)?
9. The books belong to (them/they) and (us/we).
10. The man asked (her/she) and Shrishti several questions after the programme.
11. Mrs. Sengupta was worried about you and (them/they).
12. Between you and (me/I), we think he's a fraud.
13. Neither (them/they) nor (us/we) were ready at six.
14. Do you blame Shraddha and (me/I) for leaving?
15. Either (her/she) or (him/he) broke a record.

2.Fill in the blanks with either reflexive pronoun or reciprocal pronoun

1. John hurt when climbing the tree.

2. Peter and Sue helped with the homework.

3. I feel much better today.

4. Did she make a cup of tea?

5. The naughty monkey looked at in the mirror.

6. Milly and Billy smiled at

7. We're meeting at the station.

8. During the meeting, Jane and Mary were talking to

9. I don't remember where we spent our holiday last year.

10. We need to concentrate

11.. The cats were happily grooming

12. He amused

13. The teacher suggested these changes.

14. Vibha blamed

15. She slipped beside the pool and hurt.....

Past Simple Form

Write the past simple form of each verb:

1. do - _____
2. buy - _____
3. come - _____
4. hear - _____
5. feed - _____
6. hurt - _____
7. forget - _____
8. write - _____
9. think - _____
10. speak - _____

Past Participle Form

Write the past participle form of each verb:

1. begin - _____
2. find - _____
3. tell - _____
4. steal - _____
5. swear - _____
6. mistake - _____
7. let - _____
8. keep - _____
9. freeze - _____
10. do _____

Fill in the blanks with the past simple form of the verb in parentheses:

1. A mosquito _____ (bite) me!
2. Grandpa _____ (catch) eight fish on our fishing trip.
3. When Whitney stepped in the gum, her flip-flop _____ (stick) to it.
4. They _____ (wake) up at 4:30 a.m. to catch their 7:00 flight.
5. We _____ (fly) from New York to Atlanta for the conference last month.
6. My stomach _____ (feel) strange for hours after I ate that old bread.
7. Stephanie _____ (give) her sister a CD for her birthday.
8. Ben and Matt _____ (make) a movie about a really smart janitor at Harvard.
9. The dog _____ (dig) a hole in the yard.
10. I stepped in the hole and _____ (break) my ankle.

Enter the missing verb in each line in the chart:

Base	Past Simple	Past Participle
Teach	Taught	Taught
Shoot		Shot
Quit	Quit	
	Ran	
Fight		
		Had
Win		Won
Take	Took	
	Shook	Shaken
Drive	Drove	
Bring		Brought
See		
Throw		Thrown
	Found	
	Spoke	Spoken
	Grew	



Complete the given table with the correct words.

VERB	NOUN	ADJECTIVE
act	action	
beautify		beautiful
	benefit	beneficial
care	care	
clear		clear
comfort	comfort	
considerable	consideration	
craze		crazy
create		creative
decisive	decision	
delight	delight	
differ		different
	distraction	distracted/ing
hate	hatred	
hope		hopeful
	impression	impressive
include	inclusion	
indicate	indicative	
insulting	insult	
intend	intention	
madden	mad	
define		definite
originate	origin	
bore	boredom	
confide	confidence	

Holiday

Homework

G.K.

CLASS- VI

Dear Parents & Students

Vacation is an excellent time to learn new skills. It is a welcome break for the children to enjoy and explore things in their own way. Here are some interesting and fun-filled activities for the children to learn and keep them occupied during the holidays.

Do the holiday homework on loose sheets.

1. Collect five pictures of different currency and mention its country.
2. Write 8 inventors name with their invention.
3. Paste any 5 picture national symbols
 - a) National Bird
 - b) National animal
 - c) National tree
 - d) National emblem
 - e) National fruit
4. Write 15 current affairs of June in your GK note book.
5. Learn chapter-1 to 7 from GK book.



Edit with WPS Office

ग्रीष्मावकाश हेतु गृहकार्य (2023-24)

कक्षा -छठी

विषय -हिंदी

- विद्यार्थी भाषा की वर्तनी तथा लेख की स्वच्छता का विशेष ध्यान रखें-

- प्रश्न -1 भारत को स्वतंत्र कराने में अनेक वीरों ने अपना बलिदान दिया। किन्हीं 6 वीरों का सचित्र कोलाज A3 साइज शीट पर बनाकर नाम लिखिए।
- प्रश्न -2 'मातृभाषा' विषय पर एक आकर्षक सचित्र पोस्टर A3 साइज शीट पर बनाइए।
- प्रश्न -3 अपने दादा-दादी या नाना-नानी के जन्मदिवस पर केक काटते हुए सचित्र बधाई कार्ड बनाइए।
- प्रश्न -4 'योग का महत्व' विषय पर लगभग 100 शब्दों में एक अनुच्छेद A4 साइज शीट पर लिखिए।
- प्रश्न -5 'मणिपुर के कृषि एवं उद्योग' विषय पर एक सुंदर परियोजना कार्य तैयार कीजिए।

- कक्षा में कराए गए पाठ्यक्रम की पुनरावृत्ति कीजिए