




HOLIDAY HOMEWORK




NAME -

CLASS - **2**



WISHING ALL
- A HAPPY & SAFE
SUMMER
HOLIDAY



ग्रीष्मकालीन अवकाश - गृहकार्य

① चित्र देखकर सही उत्तर चुनकर लिखिए :



पतंग

गुब्बारा

लड़कियाँ

इन्द्रधनुष

लड़के

रंग-बिरंगे

1. आसमान में सुंदर दिखाई दे रहा है ।

2. एक लड़की उड़ा रही है ।

3. दो रेत से खेल रही हैं और उनके पास गेंद हैं ।

4. नीली कमीज़ पहनी लड़की के हाथ में पीला है ।










5. दो गेंद से खेल रहे हैं ।

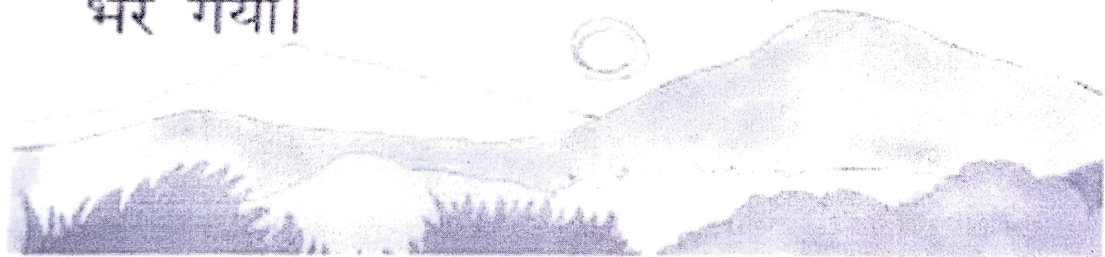
[२]

② अपनी पाठ्य पुस्तक उमंग दीपज्योति से पाठ-1
प्यारा भारत व पाठ-4 सवेरा कविता याद
कीजिए ।

③ हिन्दी श्रुतलेख (Dictation) की कार्य पुस्तिका में पाँच पेज सुलेख कीजिए ।

④ चित्रों के नाम लिखकर अनुच्छेद पूरा करो।

एक  था। घर की 
पर  के पेड़ की छाया
थी। राम छाया में बैठकर 
पढ़ता था। एक बार एक 
राम के ऊपर गिरा। राम के 
खराब हो गए। राम  पर
जाकर नहाया। फिर 
छा गए। पानी बरसा। राम ने बारिश में
एक  रख दिया। टब
भर गया।



⑤ Art Integration Work

पाठ-3 चिड़ियाघर की सैर में आपने जिन पशु-पक्षियों के बारे में पढ़ा उनके चित्र चिपकाकर व उनकी बोलियाँ उनके सामने रख चार्ट पर लिखिए ।

SAMAR STUDY HALL
Holiday Home Work
Class - 2 (2023-24)

Q1. Rewrite the following words in alphabetical order:-

a) bed, table, chair, cupboard

Ans. _____

b) cup, school, plate, fork

Ans. _____

c) bee, grasshopper, cricket, ladybug

Ans. _____

d) Ludo, carrom, snakes and ladders, chess

Ans. _____

Q2. Rewrite each sentence using capital letters and full stop or question mark:-

a) langtang is in nepal

Ans. _____

b) australia is a small continent

Ans. _____

c) sudip lives in at hill

Ans. _____

d) who lives in that house

Ans. _____

Q3. Complete the spelling :-

a) E _ _ e p _ _ a n t

b) W _ _ l _ _ u t s

c) _ _ m i _ _ e s

d) W _ _ l _ _

e) R _ _ c _ _

Q4. Write two rhyming words for each:-

a) own - _____ , _____

b) trick - _____ , _____

c) new - _____ , _____

d) hide - _____ , _____

Q5. Learn and write one poem from English literature book and write in your English dictation note book.

Q6. Write 10 pages in your English dictation notebook.

MATHEMATICS

Activity

Family Birthdays

Record the birthdays of your family members in a scrapbook. The birthday should be in ascending order of age (youngest members of the family to the eldest member of the family). Also paste pictures of your family members.

Q.1 Write the number and number names of the following:

9 tens and 3 ones: _____

8 tens and 6 ones: _____

3 hundreds 2 tens and 8 ones: _____

2 hundreds 1 tens and 1 one: _____

Q.2 Expand the following:

123: _____

839: _____

744: _____

200: _____

Q.3 Fill in the missing numbers:

121	122			125
		128		
131			134	
	137			
		143		

Q.4 Arrange the numbers in ascending order:

156, 198, 134, 176, 89: _____

201, 155, 221, 105, 98: _____

56, 98, 17, 99, 133, 11: _____

87, 144, 76, 111, 99, 121: _____

Q.5 Find the place value of:

89: _____ 34: _____ 99: _____

60: _____ 76: _____ 54: _____

Q.6 What comes after:

156 _____ 123 _____ 318 _____

278 _____ 98 _____ 921 _____

363 _____ 112 _____ 219 _____

417 _____ 688 _____ 866 _____

732 _____ 421 _____ 175 _____

Q.7 What comes before:

__245 __570 __733

__490 __169 __211

__150 __940 __395

__111 __784 __475

Q.8 Put the correct sign <, >, =

234 __ 123

345 __ 568

111 __ 11

453__435

287__300

Q.9 Arrange the numbers in the descending order:




76, 98, 55, 66, 111: _____

165, 88, 12, 65, 45: _____

33, 187, 76, 88, 100: _____

12, 78, 163, 43, 98: _____

Q.10 Put bindis to show the given number on abacus:



Name- _____

WORKSHEET
Class- II Section-
Subject- EVS
Growing Up

A. Tick (✓) the correct word and cross (x) the wrong one.

1. A baby starts crawling/standing up after one year.
2. Parents/brothers take care of their younger ones.
3. Milk is good/not good for health.
4. As one grows, he becomes heavier/lighter.
5. Growth is shown by all living/non-living things.

B. Fill in the blanks with the help of words given in the box.

weight, boy, food, growth, girl

1. _____ helps us to grow up.
2. Our _____ increases as we grow.
3. An infant grows to become a _____ or _____.
4. All living beings show _____

C. Put the odd-one-out.

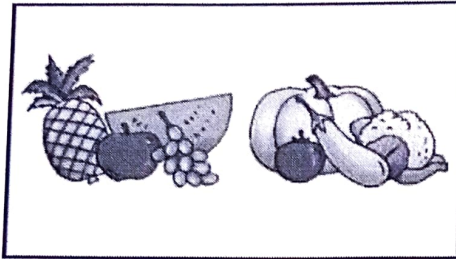
1. Fruits, Vegetables, Baby, Milk.
2. Seed, Seedling, Plant, Root.
3. Sparrow, Egg, Birdie, Young, Bird.
4. Baby, Parents, Boy, Man.

D. Match the following pictures given in column A with terms given in column B.

Column A


Column B

1.




(a) an old man

2




(b) Source of energy

3.



(c) grows from egg

4.



(d) grows from seed

Worksheet
Class - II
My Body

E. Choose the correct answer.

1. An internal organ among the following is
(a) heart (b) hands (c) legs
2. The body framework which gives shape to the body is
(a) bones (b) muscles (c) both of them
3. Lungs help us to
(a) think breathe (c) move

F. State True or False.

1. Kidneys help to remove wastes from the body.
2. Brain controls all the body systems.
3. Ribcage protects the brain.
4. All the parts of body coordinate to perform a function.

G. Match the following columns.

1.Hands	Help to breathe
2.Legs	Help to write
3.Heart	Remove waste
4.Lungs	Help to move
5.Kidney	Pumps blood

G.K Holiday Homework Class- 2

- 1- Draw a traffic light and paste pictures of traffic signs.
2. Paste the pictures of five sense organs and write their names.

Note :- Do all G.K work in G.K notebook

Computer Holiday Homework Class- 2

- * Read and learn chapter 1 knowing more about a computer,