

19/6/24

Numbers 1 to 10

mes.

word

1	•	1	•	1	•	1	•	1
2		2		2		2		2
3		3		3		3		3
4		4		4		4		4
5		5		5		5		5
6		6		6		6		6
7		7		7		7		7
8		8		8		8		8
9		9		9		9		9
10		10		10		10		10



~~19/6~~

02/12/21

Q1. Count the pictures and write the numbers.

X

1. •••• - 4

X

2. x x x x x x x x = 7

X

3. Δ Δ Δ - 3

X

4. ○ ○ ○ ○ ○ ○ ○ - 6

20/6/21

Q2. Fill in the missing numbers.

X





1 2 3 ~~4~~ 5

X

6 7 8 9 10

Q3.

Match the numbers with the correct object.

- 1.  ~~4~~
- 2.  ~~2~~
- 3.  ~~5~~
- 4.  ~~7~~

24/16/24

Numbers and Number Names
Number and
1 to 10

- 1 - One
- 2 - Two
- 3 - Three
- 4 - Four
- 5 - Five
- 6 - Six
- 7 - Seven
- 8 - Eight
- 9 - Nine
- 10 - Ten

16/24

Q1. Write in words.

- X
- ② 2 - Two
- ④ 4 - Four
- ⑧ 8 - Eight
- ⑩ 10 - Ten

Q2. Write in figures.

- 1. One - 1
- 2. Three - 3
- 3. Five - 5
- 4. Nine - 9

~~25~~

26/24

Small - Big



big



small



Small



~~big~~

26/2/21

Q1. Write under bigger object
 under smaller object



27/6/21


Behind - In front



1. The sun is ~~behind~~ the house.
x
2. The house is in front of the sun.
x

27/6/24

Q2. Write behind and in front.



1. The cloud is in front of the sun.

x

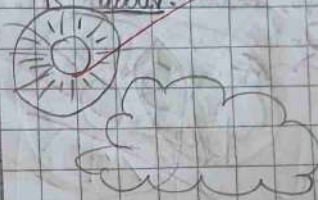
x

2. The sun is behind the cloud.

28/6/24

Above - Below

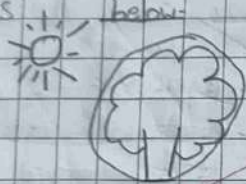
1. Circle the object which is above.




Q2. Circle the object which is below.



Q3. Circle the object that is below:



Q4. Circle the object that is above:



31/7/20
x

Addition table of 1.

~~1 + 0 = 1~~

~~1 + 1 = 2~~

~~1 + 2 = 3~~

~~1 + 3 = 4~~

~~1 + 4 = 5~~

~~1 + 5 = 6~~

~~1 + 6 = 7~~

~~1 + 7 = 8~~

~~1 + 8 = 9~~

~~1 + 9 = 10~~

~~1 + 10 = 11~~

☆
Beautiful
Handwriting

~~dit~~

1032 One and Many

Q1. Write one and many

1. ○ — One ball

2. ○ ○ — Many balls

3. △ — One Triangle

4. △ △ △ — Many Triangle

1033 One and Many

Q1. Write one and Many in the given blanks

1. ☼ — One flower

2. ☼ ☼ ☼ — Many flowers

3. ☆ — One star

4. ☆ ☆ ☆ — Many stars

12/2/24

Number and Number Name
11 to 20

X

11 - Eleven

12 - Twelve

13 - Thirteen

14 - Fourteen

15 - Fifteen

16 - Sixteen

17 - Seventeen

18 - Eighteen

19 - Nineteen

20 - Twenty

18/2/24

Q1. Write in words.

X

12 - Twelve

14 - Fourteen

18 - Eighteen

20 - Twenty

X

Q2. Write in figures.

Eleven = 11

Fifteen = 15

Seventeen = 17

Nineteen = 19

~~18/2/24~~

25/1/24

Addition table of 2.

x
x

2	+	0	=	2
2	+	1	=	3
2	+	2	=	4
2	+	3	=	5
2	+	4	=	6
2	+	5	=	7
2	+	6	=	8
2	+	7	=	9
2	+	8	=	10
2	+	9	=	11
2	+	10	=	12

~~V good~~
~~2/8~~
2/8

~~2/8~~