



SWAMI VIVEKANAND PUBLIC SCHOOL

HOLIDAY HOMEWORK

SESSION –(2024-25)

Summer vacation is starting today.....

The teachers are shouting “Hip, hip, hooray !”

Our dear principal grins from ear to ear.

And now runs down the hall shouting “Summer is here!”

The buses come early- they’re usually late.

The teachers say, Hurry up! Pack up! Don’t wait!

The school bell is ringing. There’s no time to chat.

The whole school is emptied in one second flat.

Everone’s happy. Their spirits are flying.

Except for our parents.....they’re sulking and crying!

Name:.....

Class: III



HELLO!

Summers Break Duration 28th May to 1st July 2024.
School reopens on 2nd July.

Vacations are the most appropriate time for Kids to refresh and rejuvenate themselves, to be creative, to learn new skills and perform more enthusiastically.

Children have ample energy which should be channelized in the right direction to get the best out of them. The holidays' homework is designed, Keeping this in mind that it will build their confidence and new skills.

STAY HAPPY ,FIT AND AWESOME.

Guidelines for parents

- Watch your child's transformation with a smile of satisfaction.
- Nurture your child's interest – be it art, assignment or anything else.
- Teach them to keep away all the technology and get with them and enjoy "OUR FAMILY TIME". As we know "Family comes first" and a family that eats together.....smiles together.
- Train your child to become independent in his daily chores.
- Set time management to accomplish their tasks, even help your child to make the work better by opting good handwriting and making their work (projects) innovative.
- Inculcate the habit of reading habit to improve the vocabulary and speaking skills.
- Take print out of all the worksheet given in the Holidays' homework and do the work on it.

BONDS ARE STRENGTHENED WHEN REAL INCIDENTS AND EXPERIENCES ARE SHARED AS A IMAGINARY TALE ,THIS ALSO RESULTS TO SHARE LIFE'S LESSONS. IT WILL REALLY HELP TO BUILD THEIR CONFIDENCE AND NEW SKILLS.

ENGLISH WORKSHEET

QUES1 – Write C if the highlighted word is a Common Noun and P if it is a Proper Noun.

- A) Madhur is my best friend. –
- B) She gave me a bite of her Burger -

QUES 2- Circle the correct plural

- A) Glass – glass , glasses
- B) Bus – buses, buss

QUES 3 – Match the collective noun to common nouns

A bunch of	wolves
A pack of	ants
A library of	flowers
A colony of	books

QUES 4 – Tick the correct words from the pairs of homophones to complete the sentence.

- A) My eye/ I is hurting because I watched tv for many years.
- B) I / eye want to become a cartographer.

Ques 5 – Underline the Subject and circle the Predicate in each sentence.

- A) The women were washing clothes near the pond.
- B) Divya drew the post office on a map.

Ques 6 – Fill in the blanks with correct pronouns.

- 1) Ranjan is not my classmate. _____studies in a different class.
- 2) Jenny doesn't like to help others. _____is a selfish girl.

Ques 7 – Fill in the blanks with correct possessive pronoun.

- 1) The puppy was playing with the toy. The toy is _____.
- 2) ‘ Is the pen _____?’ I asked Varun.

QUES 8- Fill in the blanks with correct verbs in simple present tense.

- 1) We _____ to school daily.
- 2) Ahmad _____ the ball up in the air.
- 3) She _____ up at six every morning.

MATHS WORKSHEET

QUES 1 - Write number names for the following .

- a) 458- _____
- b) 1019 – _____
- c) 4378 – _____
- d) 590 – _____

QUES 2 – Write face value and place value for each digit of the given numbers.

- a) 4576 Face Value _____, _____, _____, _____
 Place Value _____, _____, _____, _____
- b) 8026 Face Value _____, _____, _____, _____
 Place value _____, _____, _____, _____

QUES 3 – Arrange the following in ascending order.

- a) 1234,5210,9541,7524
- b) 8629,7610,9416,9528

QUES 4- Arrange the following in descending order

- A) 4587,7610,9416,9528.
- B) 9467, 1027, 3856, 8438

QUES 5 – Build greatest 4 digit number.

- a) 9207
- b) 8108

QUES 6 – Addition

4 9 5	3 5 8	4 4 8 4
+1 3 4	+1 8 2	+2 2 0 4

QUES 7 – Subtract

7 8 2	9 0 0	8 5 8
<u>-5 4 6</u>	<u>-5 4 0</u>	<u>- 3 9 6</u>

SOCIAL STUDIES

- Read the chapters 2,4 and 5 carefully and find out 5 fill in the blanks from each chapter and write in Holidays homework notebook.
- Learn the notebook work and student book work of chapter 2 and 4.
- Draw the diagrams of road signs , traffic lights and directions twice in your holiday's homework notebook.
- Do the interactivity, play games and watch animations related to chapter 1,2,3,4 on Oxford advantage app.

WORKSHEET

Road Safety

1) What is this crossing called  ? _____

2) What does this mean?  _____

3) What does this mean?  _____

4) What is the name of this object  _____

5) Fill in the missing word. When crossing the road you should stop, _____ and listen.

6) Circle the correct word in the brackets. You should never (walk, run) across the road.

7) Why is it dangerous to cross the road between parked cars?

8) Look at this picture  Do you think this person could help you cross the road? _____

A. Put a tick (✓) on right picture and cross (×) on the wrong ones in the box provided:



B. Choose the correct option.

- To cross a road, we should use the _____.
 - footpath
 - road
 - zebra crossing
 - footboard
- We should cross the road with _____.
 - classmates
 - younger
 - elders
 - strangers
- We should play _____.
 - in the kitchen
 - in the classroom
 - on the road
 - in the park
- Always use _____ while driving a motorbike and bicycle.
 - zebra crossing
 - seat belt
 - Mobile
 - helmet

Reading a Map



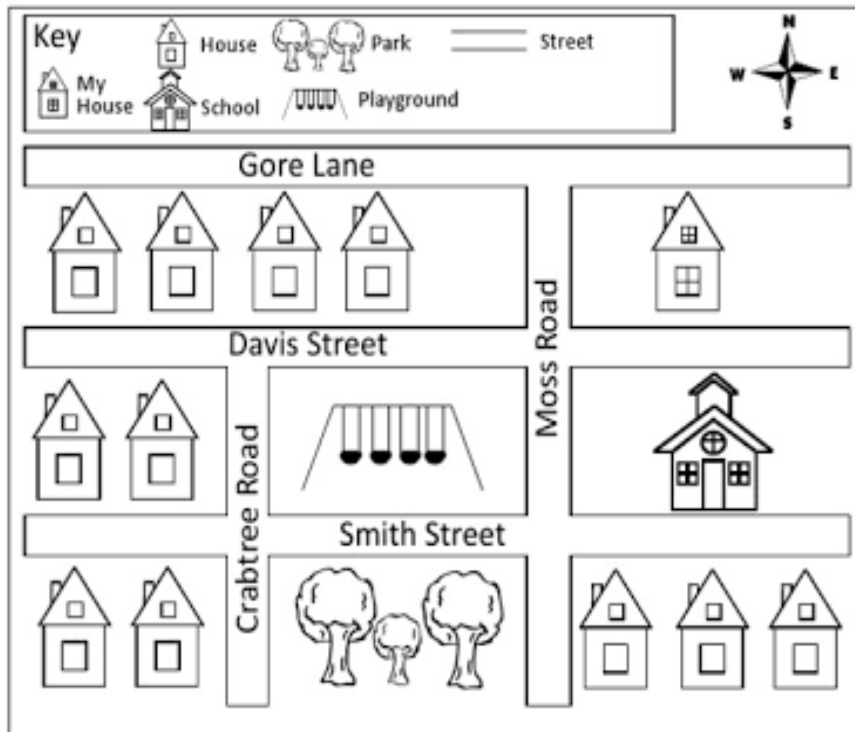
1. Label **N**, **S**, **E**, and **W** on the compass rose.
2. Color the land **green** and the water **blue**.

Write **north**, **south**, **east**, or **west** to complete each sentence.

3. The rowboats are _____ of the campfire.
4. The camping trailers are _____ of the tents.
5. The cabins are _____ of the tents.
6. The campfire is _____ of the camping trailers.
7. The island is _____ of the cabins.

My Neighborhood

Use the map of the neighborhood below to answer the questions at the bottom of the page.



1. My house is _____ of the school. (North, South, East, or West)
2. The _____ is south of the playground.
3. To get from my house to the school, you must cross _____ Street.
4. The school is _____ of the playground. (North, South, East, or West)
5. How many houses are West of Crabtree Road? _____
6. How many house are South of Smith Street? _____
7. The playground is _____ and _____ of my house. (North, South, East, or West)
8. The school is _____ and _____ of the park. (North, South, East, or West)

(साहित्य)

1. पाठ -1,2,3 पढ़े और प्रत्येक पाठ में से 10-10 कठिन शब्द ढूँढ कर उनके अर्थ लिखकर वाक्य बनाओ।
2. पाठ -1,2,3 से संबंधित कॉपी व किताब में किया गया कार्य याद करें।

(व्याकरण)

3. नेहरू जी के बारे में इंटरनेट से जानकारी प्राप्त कर एक अनुच्छेद अपनी कॉपी (holidays homework) में लिखो।
4. संज्ञा, सर्वनाम, लिंग, वचन की परिभाषा व उनके भेद याद करके कॉपी में लिखें।

वर्ग पहली में निम्न के विपरीत लिंग ढूँढिए -

संकेत


धो	रा	कु	चु	या
बी	ज	ली	हि	ख
द	कु	ति	या	म
प	मा	सा	ध	च
भ	र	बु	ढ़ि	या

1. धोबिन का पुल्लिंग
2. चूहा का स्त्रीलिंग
3. कुत्ते का स्त्रीलिंग
4. राजकुमारी का पुल्लिंग
5. बूढ़ा का स्त्रीलिंग



संकेतों की सहायता से शब्द सीढ़ी पूरी कीजिए -

1. (ऊपर से नीचे) अध्यापिकाएँ का एकवचन
2. (सीधे) लड़के का एकवचन
3. (ऊपर से नीचे) लता का बहुवचन
4. (सीधे) कविता का बहुवचन
5. (ऊपर से नीचे) कमीज का बहुवचन।



भाषाओं को उनकी लिपि से मिलाइए।

भाषा

लिपि

बंगाली

रोमन

उर्दू

देवनागरी

अंग्रेज़ी

गुरुमुखी

संस्कृत


बांग्ला

पंजाबी

फ़ारसी



नीचे दिए चित्रों में भाषा का कौन-सा रूप दिखाई दे रहा है?



(1) निम्नलिखित गद्यांश को पढ़कर नीचे दिए प्रश्नों के उत्तर लिखिए।

ओणम दक्षिण भारत के केरल प्रदेश का प्रमुख त्यौहार है। यह त्यौहार प्रत्येक वर्ष सावन के महीने में श्रवण नक्षत्र में चार दिन तक मनाया जाता है। यह त्यौहार राजा महाबली की याद में मनाया जाता है। केरल में रहने वाले लोगों का मानना है कि ओणम के अवसर पर उनके प्रिय राजा महाबली अपनी प्रजा को देखने आते हैं। उनके आने की खुशी में लोग बड़ी श्रद्धा से घर के द्वारा पर रंगोली बनाते हैं, घरों में रोशनी करते हैं और चावल के व्यंजन बनाते हैं। जगह-जगह भगवान विष्णु और राजा महाबली की मूर्तियां स्थापित की जाती हैं। इन्हे स्नान करवाकर के भोग लगाया जाता है। लोग इस दिन के लिए नए-नए वस्त्र सिलवाते हैं। इस त्यौहार का मुख्य आकर्षक नौका दौड़ वह हाथियों का जुलूस होता है।

- 1) किसकी याद में ओणम का त्यौहार मनाया जाता है?
- 2) ओणम का त्यौहार कब और कितने दिन तक मनाया जाता है?
- 3) ओणम के त्यौहार का मुख्य आकर्षण क्या होता है?
- 4) केरल के लोग ओणम का त्यौहार किस तरह मानते हैं?
- 5) इस गद्यांश के लिए उपर्युक्त शीर्षक लिखिए।

(2) निम्नलिखित अपठित गद्यांश को ध्यान से पढ़ कर नीचे दिए गए प्रश्नों के उत्तर दो –

प्रत्येक मनुष्य की जीवित रहने के लिए 3 मूलभूत आवश्यकताएं होती हैं- भोजन, हवा और पानी। इन तीनों में से हवा सबसे महत्वपूर्ण है। भोजन के बिना हम कई दिनों तक भूखे रहकर भी जीवित रह सकते हैं। पानी के अभाव में हम कई घंटों तक जी सकते हैं। किंतु हवा के अभाव में तो पल भर भी हमारा जीवित रहना संभव नहीं है।

- प्र1. मनुष्य के जीवन के 3 मूलभूत आवश्यकताएं कौन सी है।
- प्र 2. पानी के अभाव में हम कितनी देर तक जीवित रह सकते हैं।
- प्र . 3 जीवन की मूलभूत आवश्यकता में सबसे महत्वपूर्ण कौन सी है।
- प्र . 4 पानी शब्द का वाक्य बनाएं।
- प्र. 5 संभव शब्द का विलोम शब्द लिखें।

Science Worksheet

Food We Eat

Circle the odd one out.

1.	apple	radish	banana
2.	mango	orange	potato
3.	onion	paneer	curd
4.	pasta	milk	noodles
5.	rice	wheat	rose

Identify the following food and write their names.

vegetables, milk, egg, fruits, butter, cheese



Food We Eat

Fill in the blanks.

grains, chew, raw, eat, health, milk, cooked, digest,
fixed, wash

1. We should _____ our food properly.
2. Babies take _____ as their food.
3. We should eat fresh and well _____ food.
4. We should have our meals at _____ time.
5. We get fruits, vegetables and _____ from plants.
6. We should _____ our hands before and after meals.
7. Chips and cold drinks are not good for our _____.
8. Fruits can be eaten _____ without being cooked.
9. Water helps us to _____ food we eat.
10. We must not _____ uncovered food.

Name the following:-

- a. Breathing organ in humans. _____
- b. The things that do not breathe eat grow. _____
- c. All animals living in soil. _____
- d. Two energy giving food items. _____
- e. Two living things. _____
- f. An animal that lay eggs . _____
- g. Minerals obtained from soil. _____
- h. An animal that give birth to young ones. _____

Choose the correct answer:

- 1. We wear cotton clothes on a _____
a. Hot day b. cool day c. rainy day
- 2. Wool comes from the _____
a. Horse b. sheep c. cow
- 3. Cotton clothes keep us _____
a. cool b. warm c. uncomfortable
- 4. Cotton comes from _____ plants.
a. cotton b. jute c. bamboo
- 5. We call the _____ in case of a fire.
a. hospital b. fire station c. police station
- 6. The flax plant is used to make _____ fabric.
a. linen b. jute c. polyester
- 7. During winter, we wear clothes made of _____
a. plastic b. wool c. cotton
- 8. Silk is obtained from _____
a. mulberry plant silkworm c. animal skin
- 9. People staying in 9. the same locality as ours, are known as our _____
a. parents b. cousins c. neighbours
- 10. We can keep our valuables safe in a _____
a. police station b. bank c. fire station

1. Fill in the blanks.

- _____ is a man-made material.
- Cotton and jute are examples of _____ fibres.
- silk is extracted from the _____.
- Clothes protect us from _____ and _____.

2. Choose the correct answer.

A. Which of the following is not a synthetic fibre.

- Lycra
- flax
- rayon
- polyester

B. Which of the following statement is false.


- Cotton absorbs heat
- Lawyers wear black coat
- clothes protect us from dust
- Clothes are made only from natural fibres

C. Clothes of a baby or a sick person should be.

- Used regularly
- Rinsed in antiseptic
- Wash with other clothes
- Used for other purposes also

3. Answer in one word.

- The colour of doctor's coat



Hindi Project

१२. संज्ञा का एक 2d मॉडल बनाएं।(Roll no 1-15)

१३. सर्वनाम का 2d मॉडल बनाएं।(Roll No 16-33)

Social Science

- Make the model of a house using old cardboard boxes. (Roll No. 1-7)
- Make the model of bank using old cardboard boxes. (Roll no.8-14)
- Make the model of a Park using old cardboard boxes. (Roll No. 15-21)
- Make the model of Post office using old cardboard boxes. (Roll no.22-33)
-

English

- Do the work given in assignment sheets neatly and properly.
- Do the super test assignment -3,4 and 13 in B.B.C Compacta.
- Read the chapter 1 to 5 carefully, mark the words from each chapter. Arrange them alphabetically and make the dictionary as discussed in class(make it presentable).
- Do listening skill activity of chapter – 1 to 6 from Oxford App (My Bag).
- Revise full syllabus done till date properly.

Math

- 1) Do the given worksheet neatly and properly.
- 2) Make the charts and model according to the roll no assigned:-
 - 1) 2-D and 3-D shapes model (roll no – 1 to 8)
 - 2) Addition Model (roll no – 9 to 16)
 - 3) Abacus Model (roll no – 17 to 24)
 - 4) Subtraction wheel (roll no – 25 to 33)
- 3) Revise the full syllabus done till date.
- 4) Do the interactivity skill from oxford app (chapter1 -3)

Science

- Do the worksheet given below in separate notebook.
- Read chapter 1,2,3 carefully
- Learn notebook and student book work of chapter 1,2,3
- Do science worksheets .
- Do interactivity related to chapter 123 in Oxford advantage app.
- Write words to know section in holidays homework notebook.

Make a scrap book using A4 size sheets:

- Topic :-**
- Draw a diagram of Photosynthesis.
 - Paste different types of seeds.
 - Make Save environment posters.
 - Paste Different types of flowers.

Art & Crafts :-

- Make a wall hanging using ice-cream sticks (Roll No 1to 15)
- Make a wall hanging using cardboard. (Roll no 15- onwards)